

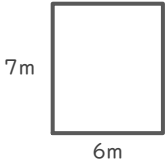
長方形や正方形の面積

年 組 名前

/16

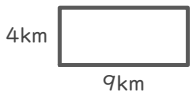
■ 次の長方形や正方形の面積を求めましょう。

①



(式)

②



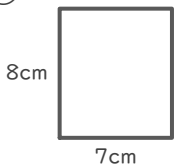
(式)

③



(式)

④



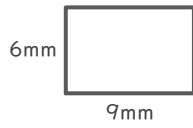
(式)

⑤



(式)

⑥



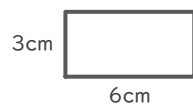
(式)

⑦



(式)

⑧



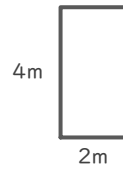
(式)

⑨



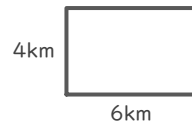
(式)

⑩



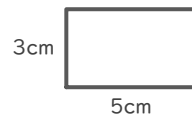
(式)

⑪



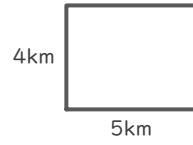
(式)

⑫



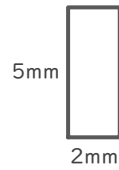
(式)

⑬



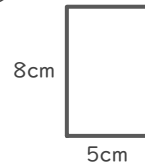
(式)

⑭



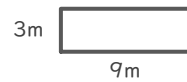
(式)

⑮



(式)

⑯



(式)

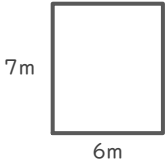
長方形や正方形の面積

年 組 名前

/16

■ 次の長方形や正方形の面積を求めましょう。

①

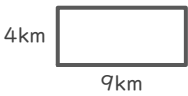


(式)

$$7 \times 6 = 42$$

$$42 \text{ m}^2$$

②



(式)

$$4 \times 9 = 36$$

$$36 \text{ km}^2$$

③

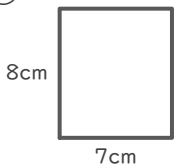


(式)

$$9 \times 9 = 81$$

$$81 \text{ mm}^2$$

④



(式)

$$8 \times 7 = 56$$

$$56 \text{ cm}^2$$

⑤

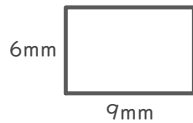


(式)

$$3 \times 3 = 9$$

$$9 \text{ km}^2$$

⑥



(式)

$$6 \times 9 = 54$$

$$54 \text{ mm}^2$$

⑦

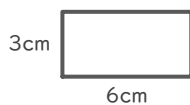


(式)

$$8 \times 8 = 64$$

$$64 \text{ m}^2$$

⑧



(式)

$$3 \times 6 = 18$$

$$18 \text{ cm}^2$$

⑨

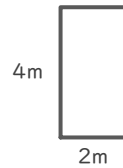


(式)

$$5 \times 5 = 25$$

$$25 \text{ mm}^2$$

⑩

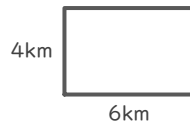


(式)

$$4 \times 2 = 8$$

$$8 \text{ m}^2$$

⑪

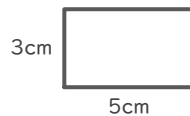


(式)

$$4 \times 6 = 24$$

$$24 \text{ km}^2$$

⑫

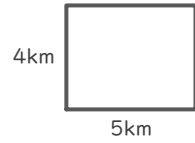


(式)

$$3 \times 5 = 15$$

$$15 \text{ cm}^2$$

⑬

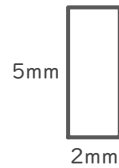


(式)

$$4 \times 5 = 20$$

$$20 \text{ km}^2$$

⑭

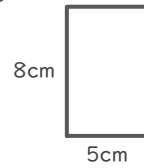


(式)

$$5 \times 2 = 10$$

$$10 \text{ mm}^2$$

⑮

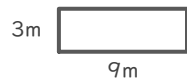


(式)

$$8 \times 5 = 40$$

$$40 \text{ cm}^2$$

⑯



(式)

$$3 \times 9 = 27$$

$$27 \text{ m}^2$$