

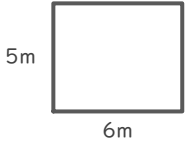
# 長方形や正方形の面積

年 組 名前

/16

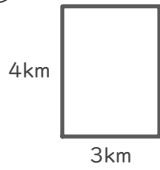
■ 次の長方形や正方形の面積を求めましょう。

①



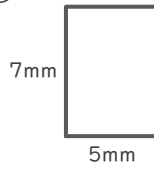
(式)

⑤



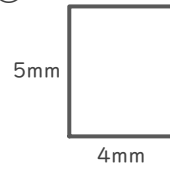
(式)

⑨



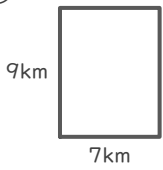
(式)

⑬



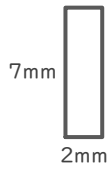
(式)

②



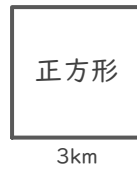
(式)

⑥



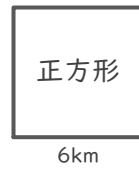
(式)

⑩



(式)

⑭



(式)

③



(式)

⑦



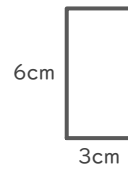
(式)

⑪



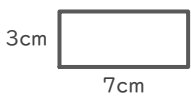
(式)

⑮



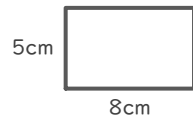
(式)

④



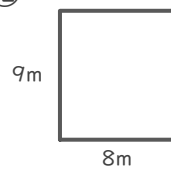
(式)

⑧



(式)

⑫



(式)

⑯



(式)

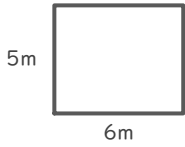
# 長方形や正方形の面積

年 組 名前

/16

■ 次の長方形や正方形の面積を求めましょう。

①

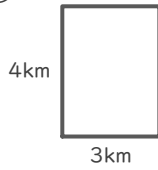


(式)

$$5 \times 6 = 30$$

$$30 \text{ m}^2$$

⑤

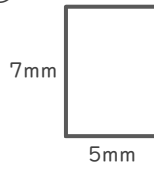


(式)

$$4 \times 3 = 12$$

$$12 \text{ km}^2$$

⑨

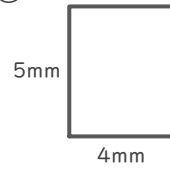


(式)

$$7 \times 5 = 35$$

$$35 \text{ mm}^2$$

⑬

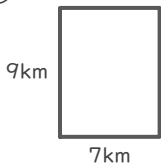


(式)

$$5 \times 4 = 20$$

$$20 \text{ mm}^2$$

②

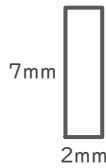


(式)

$$9 \times 7 = 63$$

$$63 \text{ km}^2$$

⑥

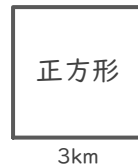


(式)

$$7 \times 2 = 14$$

$$14 \text{ mm}^2$$

⑩

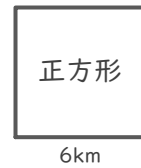


(式)

$$3 \times 3 = 9$$

$$9 \text{ km}^2$$

⑭



(式)

$$6 \times 6 = 36$$

$$36 \text{ km}^2$$

③



(式)

$$2 \times 2 = 4$$

$$4 \text{ mm}^2$$

⑦



(式)

$$4 \times 4 = 16$$

$$16 \text{ m}^2$$

⑪

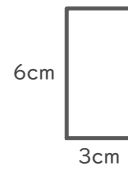


(式)

$$7 \times 7 = 49$$

$$49 \text{ cm}^2$$

⑮

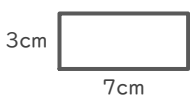


(式)

$$6 \times 3 = 18$$

$$18 \text{ cm}^2$$

④

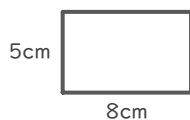


(式)

$$3 \times 7 = 21$$

$$21 \text{ cm}^2$$

⑧

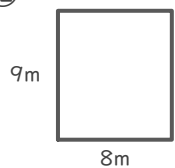


(式)

$$5 \times 8 = 40$$

$$40 \text{ cm}^2$$

⑫



(式)

$$9 \times 8 = 72$$

$$72 \text{ m}^2$$

⑯



(式)

$$8 \times 8 = 64$$

$$64 \text{ m}^2$$