

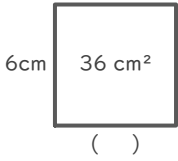
長方形や正方形の面積

年 組 名前

/16

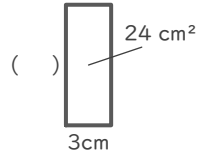
■ つぎの()にあてはまる長さをそれぞれ答えましょう。

①



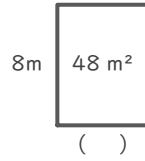
(式)

⑤



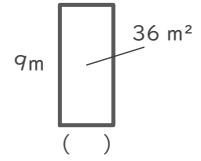
(式)

⑨



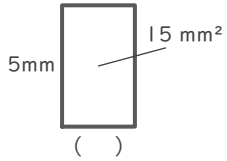
(式)

⑬



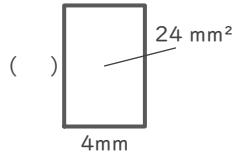
(式)

②



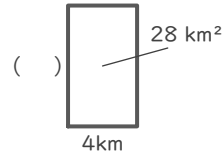
(式)

⑥



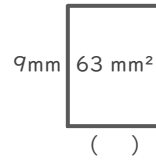
(式)

⑩



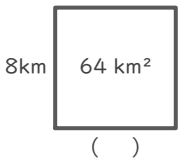
(式)

⑭



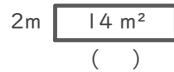
(式)

③



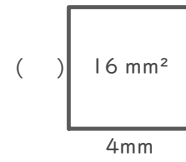
(式)

⑦



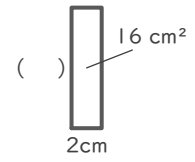
(式)

⑪



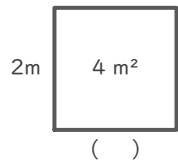
(式)

⑮



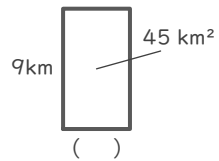
(式)

④



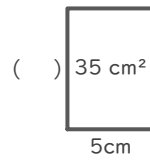
(式)

⑧



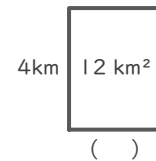
(式)

⑫



(式)

⑯



(式)

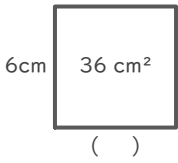
長方形や正方形の面積

年 組 名前

/16

■ つぎの () にあてはまる長さをそれぞれ答えましょう。

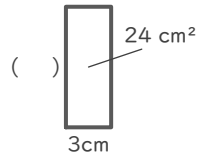
①



(式) $36 \div 6 = 6$

6 cm

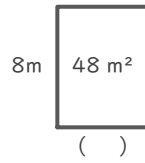
⑤



(式) $24 \div 3 = 8$

8 cm

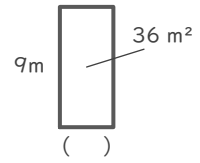
⑨



(式) $48 \div 8 = 6$

6 m

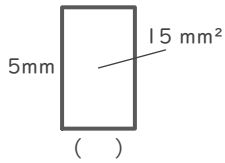
⑬



(式) $36 \div 9 = 4$

4 m

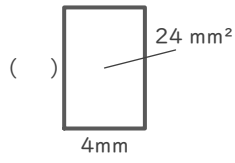
②



(式) $15 \div 5 = 3$

3 mm

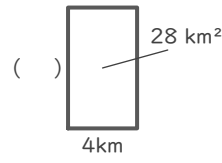
⑥



(式) $24 \div 4 = 6$

6 mm

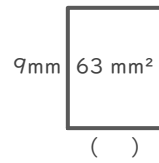
⑩



(式) $28 \div 4 = 7$

7 km

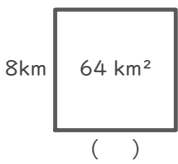
⑭



(式) $63 \div 9 = 7$

7 mm

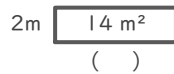
③



(式) $64 \div 8 = 8$

8 km

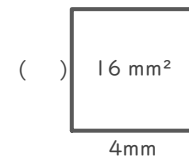
⑦



(式) $14 \div 2 = 7$

7 m

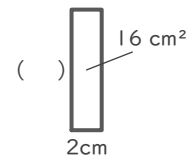
⑪



(式) $16 \div 4 = 4$

4 mm

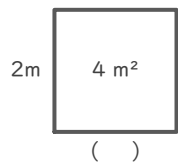
⑮



(式) $16 \div 2 = 8$

8 cm

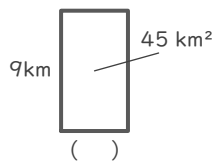
④



(式) $4 \div 2 = 2$

2 m

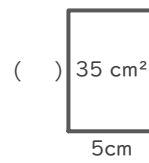
⑧



(式) $45 \div 9 = 5$

5 km

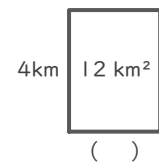
⑫



(式) $35 \div 5 = 7$

7 cm

⑯



(式) $12 \div 4 = 3$

3 km