

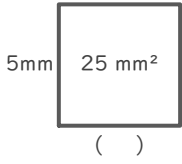
長方形や正方形の面積

年 組 名前

/16

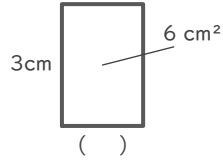
■ つぎの()にあてはまる長さをそれぞれ答えましょう。

①



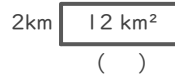
(式)

⑤



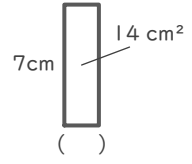
(式)

⑨



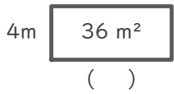
(式)

⑬



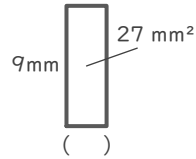
(式)

②



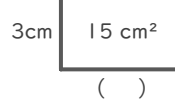
(式)

⑥



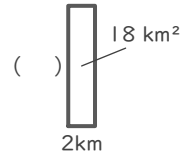
(式)

⑩



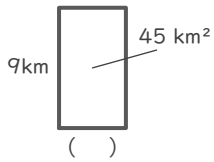
(式)

⑭



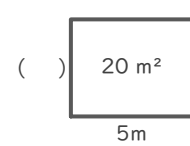
(式)

③



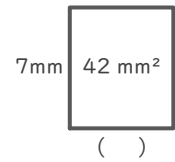
(式)

⑦



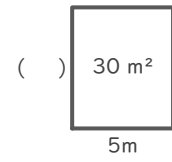
(式)

⑪



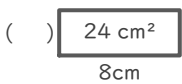
(式)

⑮



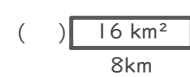
(式)

④



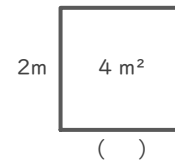
(式)

⑧



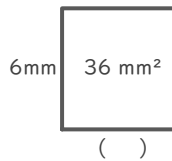
(式)

⑫



(式)

⑯



(式)

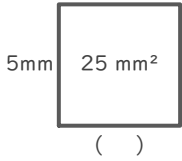
長方形や正方形の面積

年 組 名前

/16

■ つぎの()にあてはまる長さをそれぞれ答えましょう。

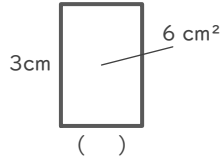
①



(式) $25 \div 5 = 5$

5 mm

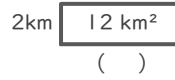
⑤



(式) $6 \div 3 = 2$

2 cm

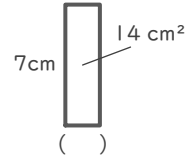
⑨



(式) $12 \div 2 = 6$

6 km

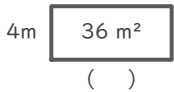
⑬



(式) $14 \div 7 = 2$

2 cm

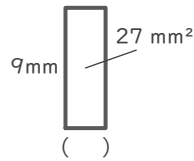
②



(式) $36 \div 4 = 9$

9 m

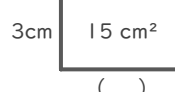
⑥



(式) $27 \div 9 = 3$

3 mm

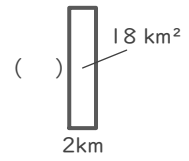
⑩



(式) $15 \div 3 = 5$

5 cm

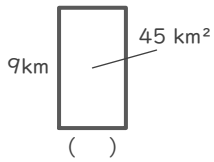
⑭



(式) $18 \div 2 = 9$

9 km

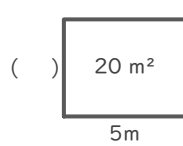
③



(式) $45 \div 9 = 5$

5 km

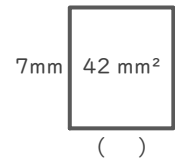
⑦



(式) $20 \div 5 = 4$

4 m

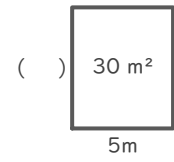
⑪



(式) $42 \div 7 = 6$

6 mm

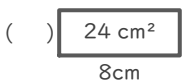
⑮



(式) $30 \div 5 = 6$

6 m

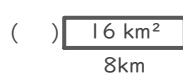
④



(式) $24 \div 8 = 3$

3 cm

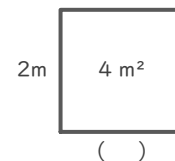
⑧



(式) $16 \div 8 = 2$

2 km

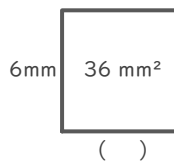
⑫



(式) $4 \div 2 = 2$

2 m

⑯



(式) $36 \div 6 = 6$

6 mm