

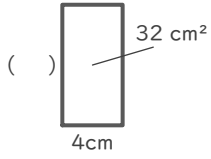
# 長方形や正方形の面積

年 組 名前

/16

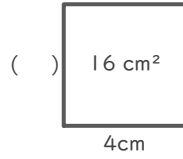
■ つぎの ( ) にあてはまる長さをそれぞれ答えましょう。

①



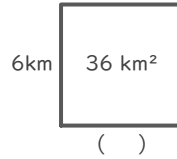
(式)

⑤



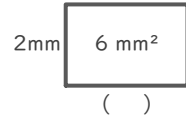
(式)

⑨



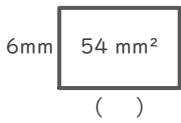
(式)

⑬



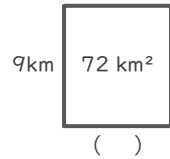
(式)

②



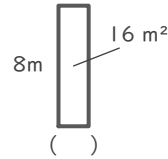
(式)

⑥



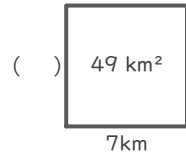
(式)

⑩



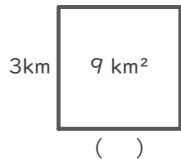
(式)

⑭



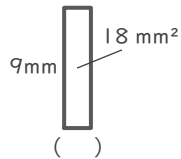
(式)

③



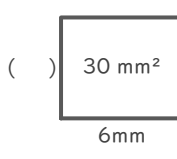
(式)

⑦



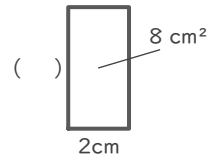
(式)

⑪



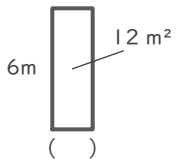
(式)

⑮



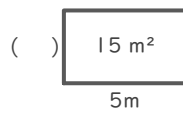
(式)

④



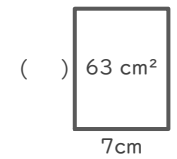
(式)

⑧



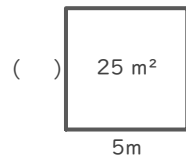
(式)

⑫



(式)

⑯



(式)

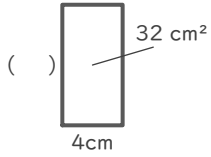
# 長方形や正方形の面積

年 組 名前

/16

■ つぎの( )にあてはまる長さをそれぞれ答えましょう。

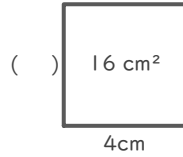
①



(式)  $32 \div 4 = 8$

8 cm

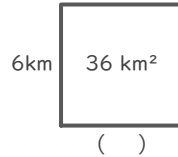
⑤



(式)  $16 \div 4 = 4$

4 cm

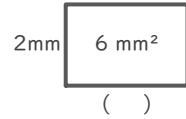
⑨



(式)  $36 \div 6 = 6$

6 km

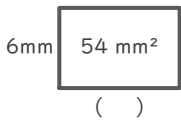
⑬



(式)  $6 \div 2 = 3$

3 mm

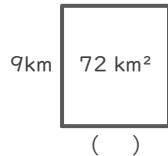
②



(式)  $54 \div 6 = 9$

9 mm

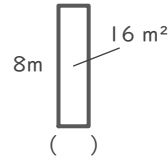
⑥



(式)  $72 \div 9 = 8$

8 km

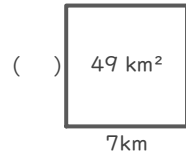
⑩



(式)  $16 \div 8 = 2$

2 m

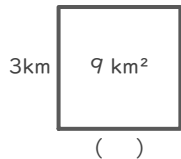
⑭



(式)  $49 \div 7 = 7$

7 km

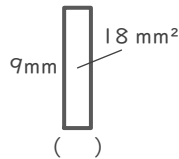
③



(式)  $9 \div 3 = 3$

3 km

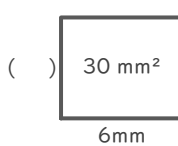
⑦



(式)  $18 \div 9 = 2$

2 mm

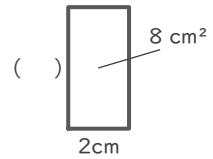
⑪



(式)  $30 \div 6 = 5$

5 mm

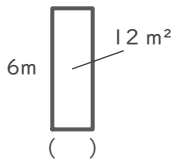
⑮



(式)  $8 \div 2 = 4$

4 cm

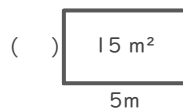
④



(式)  $12 \div 6 = 2$

2 m

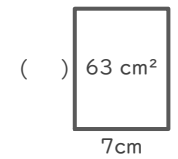
⑧



(式)  $15 \div 5 = 3$

3 m

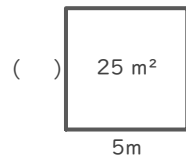
⑫



(式)  $63 \div 7 = 9$

9 cm

⑯



(式)  $25 \div 5 = 5$

5 m