

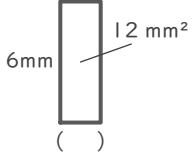
長方形や正方形の面積

年 組 名前

/16

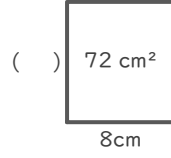
■ つぎの()にあてはまる長さをそれぞれ答えましょう。

①



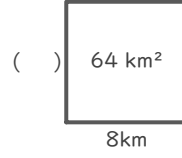
(式)

⑤



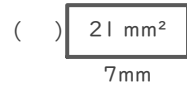
(式)

⑨



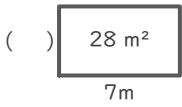
(式)

⑬



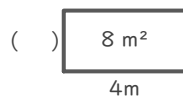
(式)

②



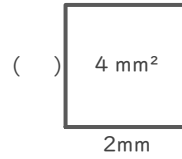
(式)

⑥



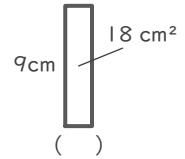
(式)

⑩



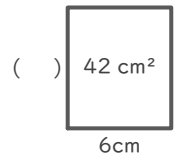
(式)

⑭



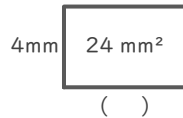
(式)

③



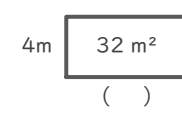
(式)

⑦



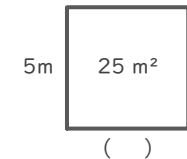
(式)

⑪



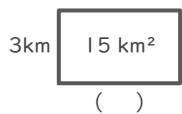
(式)

⑮



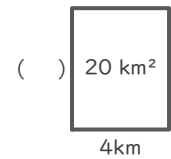
(式)

④



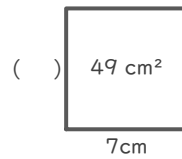
(式)

⑧



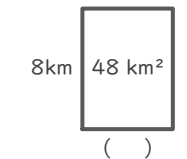
(式)

⑫



(式)

⑯



(式)

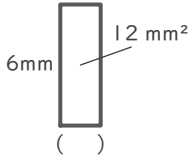
長方形や正方形の面積

年 組 名前

/16

■ つぎの()にあてはまる長さをそれぞれ答えましょう。

①

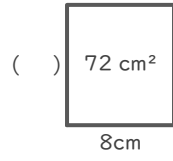


(式)

$$12 \div 6 = 2$$

2 mm

⑤

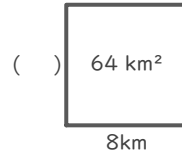


(式)

$$72 \div 8 = 9$$

9 cm

⑨

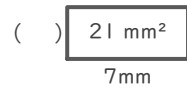


(式)

$$64 \div 8 = 8$$

8 km

⑬

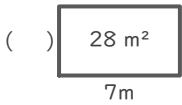


(式)

$$21 \div 7 = 3$$

3 mm

②

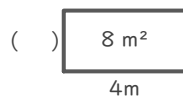


(式)

$$28 \div 7 = 4$$

4 m

⑥

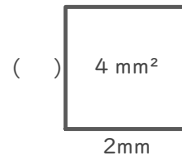


(式)

$$8 \div 4 = 2$$

2 m

⑩

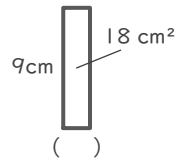


(式)

$$4 \div 2 = 2$$

2 mm

⑭

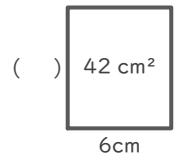


(式)

$$18 \div 9 = 2$$

2 cm

③

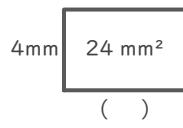


(式)

$$42 \div 6 = 7$$

7 cm

⑦

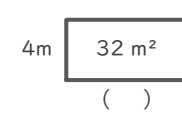


(式)

$$24 \div 4 = 6$$

6 mm

⑪

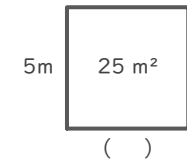


(式)

$$32 \div 4 = 8$$

8 m

⑮

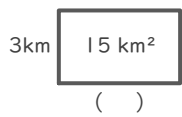


(式)

$$25 \div 5 = 5$$

5 m

④

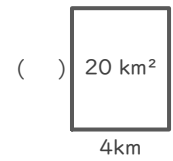


(式)

$$15 \div 3 = 5$$

5 km

⑧

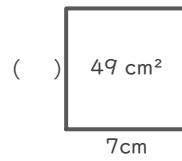


(式)

$$20 \div 4 = 5$$

5 km

⑫

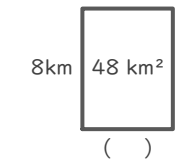


(式)

$$49 \div 7 = 7$$

7 cm

⑯



(式)

$$48 \div 8 = 6$$

6 km