

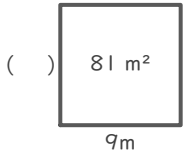
長方形や正方形の面積

年 組 名前

/16

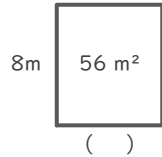
■ つぎの()にあてはまる長さをそれぞれ答えましょう。

①



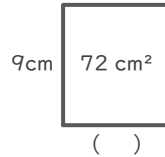
(式)

⑤



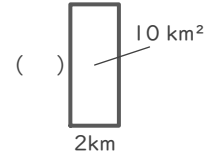
(式)

⑨



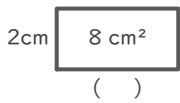
(式)

⑬



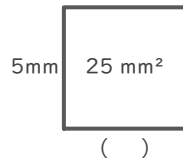
(式)

②



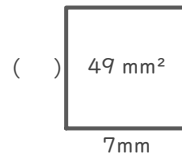
(式)

⑥



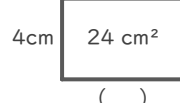
(式)

⑩



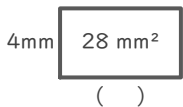
(式)

⑭



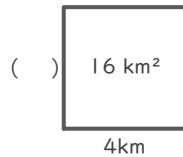
(式)

③



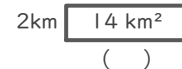
(式)

⑦



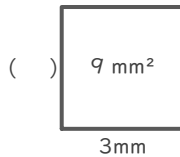
(式)

⑪



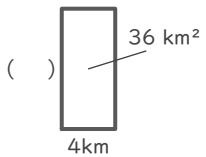
(式)

⑮



(式)

④



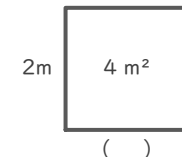
(式)

⑧



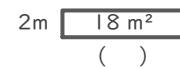
(式)

⑫



(式)

⑯



(式)

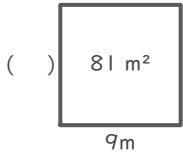
長方形や正方形の面積

年 組 名前

/16

■ つぎの()にあてはまる長さをそれぞれ答えましょう。

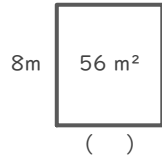
①



(式) $81 \div 9 = 9$

9 m

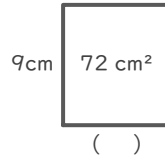
⑤



(式) $56 \div 8 = 7$

7 m

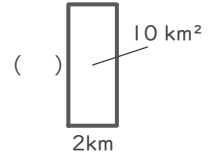
⑨



(式) $72 \div 9 = 8$

8 cm

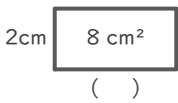
⑬



(式) $10 \div 2 = 5$

5 km

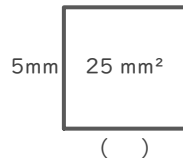
②



(式) $8 \div 2 = 4$

4 cm

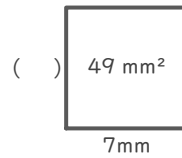
⑥



(式) $25 \div 5 = 5$

5 mm

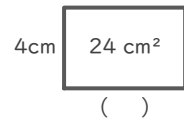
⑩



(式) $49 \div 7 = 7$

7 mm

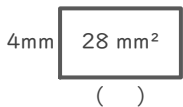
⑭



(式) $24 \div 4 = 6$

6 cm

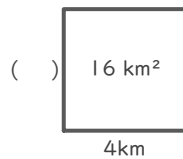
③



(式) $28 \div 4 = 7$

7 mm

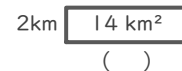
⑦



(式) $16 \div 4 = 4$

4 km

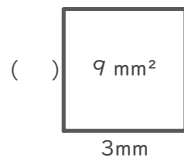
⑪



(式) $14 \div 2 = 7$

7 km

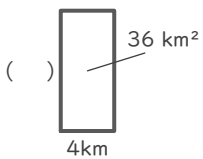
⑮



(式) $9 \div 3 = 3$

3 mm

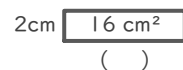
④



(式) $36 \div 4 = 9$

9 km

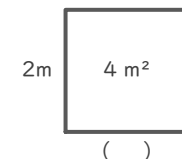
⑧



(式) $16 \div 2 = 8$

8 cm

⑫



(式) $4 \div 2 = 2$

2 m

⑯



(式) $18 \div 2 = 9$

9 m