

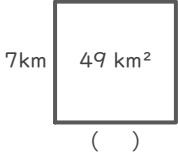
長方形や正方形の面積

年 組 名前

/16

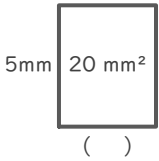
■ つぎの()にあてはまる長さをそれぞれ答えましょう。

①



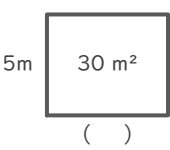
(式)

②



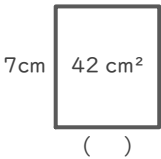
(式)

③



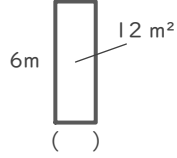
(式)

④



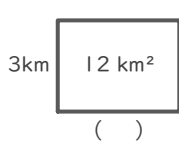
(式)

⑤



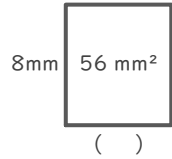
(式)

⑥



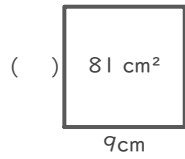
(式)

⑦



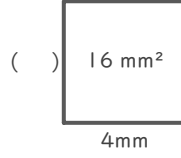
(式)

⑧



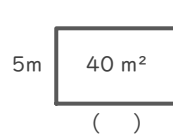
(式)

⑨



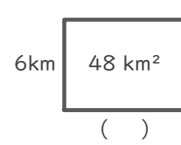
(式)

⑩



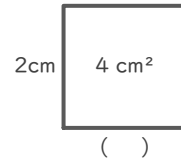
(式)

⑪



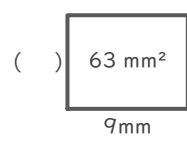
(式)

⑫



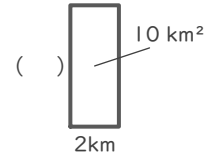
(式)

⑬



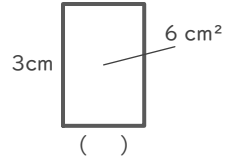
(式)

⑭



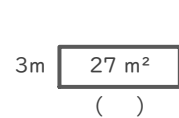
(式)

⑮



(式)

⑯



(式)

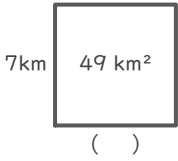
長方形や正方形の面積

年 組 名前

/16

■ つぎの()にあてはまる長さをそれぞれ答えましょう。

①

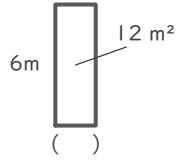


(式)

$$49 \div 7 = 7$$

7 km

⑤

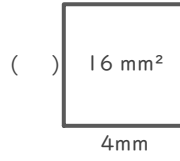


(式)

$$12 \div 6 = 2$$

2 m

⑨

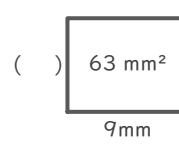


(式)

$$16 \div 4 = 4$$

4 mm

⑬

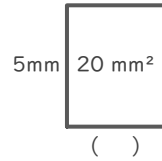


(式)

$$63 \div 9 = 7$$

7 mm

②

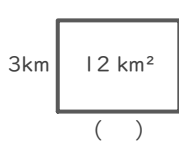


(式)

$$20 \div 5 = 4$$

4 mm

⑥

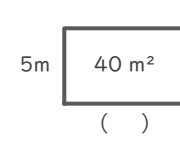


(式)

$$12 \div 3 = 4$$

4 km

⑩

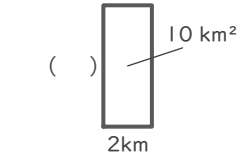


(式)

$$40 \div 5 = 8$$

8 m

⑭

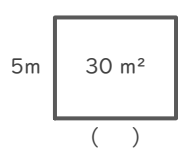


(式)

$$10 \div 2 = 5$$

5 km

③

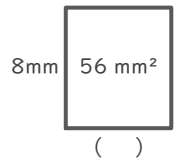


(式)

$$30 \div 5 = 6$$

6 m

⑦

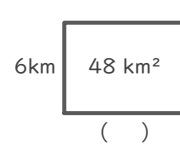


(式)

$$56 \div 8 = 7$$

7 mm

⑪

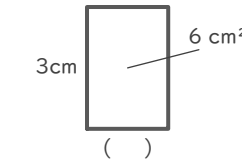


(式)

$$48 \div 6 = 8$$

8 km

⑮

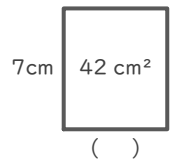


(式)

$$6 \div 3 = 2$$

2 cm

④

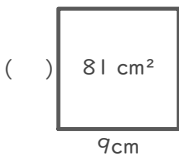


(式)

$$42 \div 7 = 6$$

6 cm

⑧

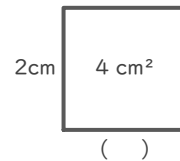


(式)

$$81 \div 9 = 9$$

9 cm

⑫

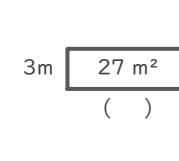


(式)

$$4 \div 2 = 2$$

2 cm

⑯



(式)

$$27 \div 3 = 9$$

9 m