


わり算の考え方

年 組 名前


/19

■ ☆ にならって、まん中の点を、わり算の答えになる点とつなぎましょう。

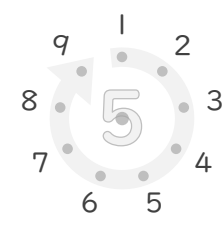
☆ $32 \div 8$



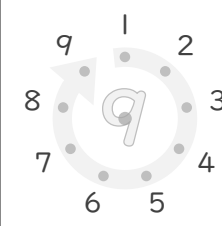
① $12 \div 4$




② $15 \div 5$




③ $72 \div 9$



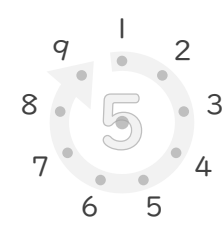
④ $4 \div 2$



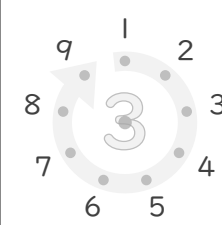
⑤ $28 \div 7$




⑥ $30 \div 5$




⑦ $27 \div 3$




⑧ $16 \div 8$



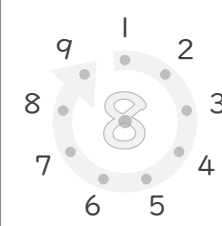
⑨ $36 \div 9$




⑩ $4 \div 4$



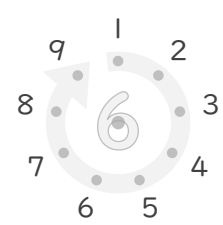
⑪ $40 \div 8$




⑫ $8 \div 4$



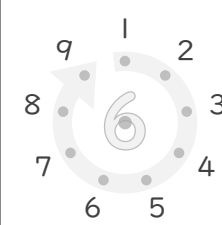
⑬ $36 \div 6$




⑭ $56 \div 7$




⑮ $24 \div 6$




⑯ $81 \div 9$



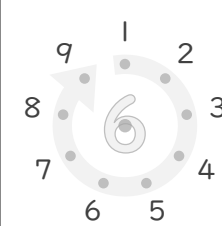
⑰ $14 \div 2$



⑱ $16 \div 4$



⑲ $54 \div 6$



わり算の考え方

年 組 名前

/19

■ ☆ にならって、まん中の点を、わり算の答えになる点とつなぎましょう。

☆ $32 \div 8$

① $12 \div 4$

② $15 \div 5$

③ $72 \div 9$

④ $4 \div 2$

⑤ $28 \div 7$

⑥ $30 \div 5$

⑦ $27 \div 3$

⑧ $16 \div 8$

⑨ $36 \div 9$

⑩ $4 \div 4$

⑪ $40 \div 8$

⑫ $8 \div 4$

⑬ $36 \div 6$

⑭ $56 \div 7$

⑮ $24 \div 6$

⑯ $81 \div 9$

⑰ $14 \div 2$

⑱ $16 \div 4$

⑲ $54 \div 6$