

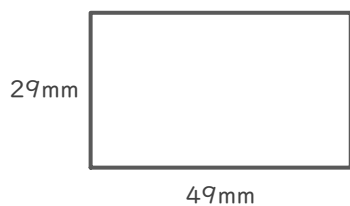
長方形や正方形の面積

____年 ____組 名前

/ 4

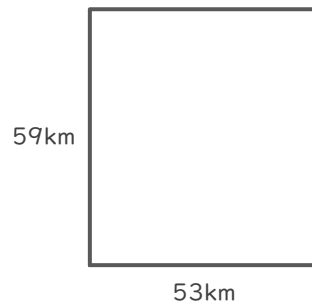
■ 次の長方形や正方形の面積を求めましょう。

①



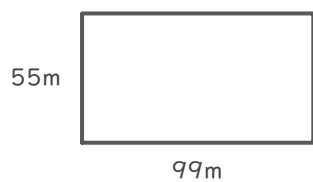
(式)

②



(式)

③



(式)

④



(式)

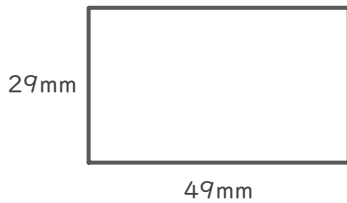
長方形や正方形の面積

____年 ____組 名前 _____

/ 4

■ 次の長方形や正方形の面積を求めましょう。

①



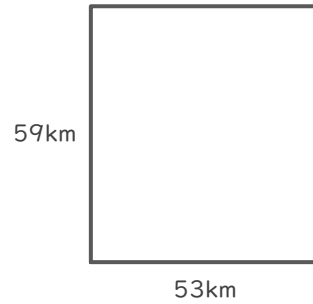
(式)

$$29 \times 49 = 1421$$

$$\begin{array}{r} 29 \\ \times 49 \\ \hline 261 \\ 116 \\ \hline 1421 \end{array}$$

$$1421 \text{ mm}^2$$

②



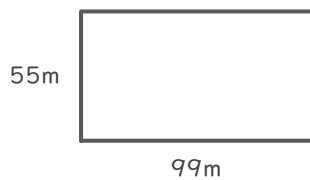
(式)

$$59 \times 53 = 3127$$

$$\begin{array}{r} 59 \\ \times 53 \\ \hline 177 \\ 295 \\ \hline 3127 \end{array}$$

$$3127 \text{ km}^2$$

③



(式)

$$55 \times 99 = 5445$$

$$\begin{array}{r} 55 \\ \times 99 \\ \hline 495 \\ 495 \\ \hline 5445 \end{array}$$

$$5445 \text{ m}^2$$

④



(式)

$$32 \times 32 = 1024$$

$$\begin{array}{r} 32 \\ \times 32 \\ \hline 64 \\ 96 \\ \hline 1024 \end{array}$$

$$1024 \text{ cm}^2$$