

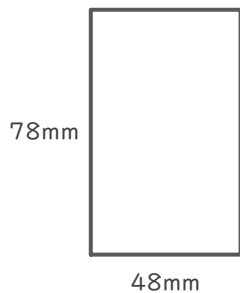
長方形や正方形の面積

____年 ____組 名前

/ 4

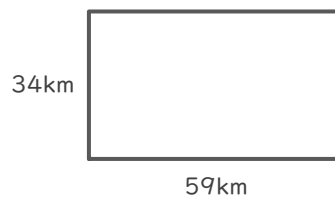
■ 次の長方形や正方形の面積を求めましょう。

①



(式)

②



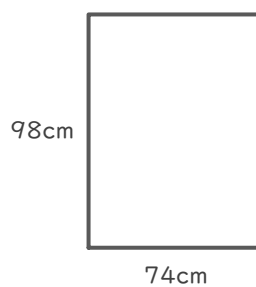
(式)

③



(式)

④



(式)

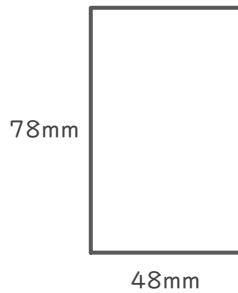
長方形や正方形の面積

____年 ____組 名前

/ 4

■ 次の長方形や正方形の面積を求めましょう。

①



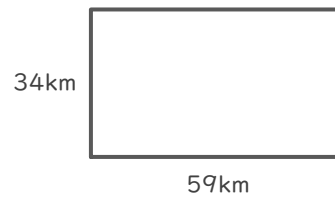
(式)

$$78 \times 48 = 3744$$

$$\begin{array}{r} 78 \\ \times 48 \\ \hline 624 \\ 312 \\ \hline 3744 \end{array}$$

3744 mm²

②



(式)

$$34 \times 59 = 2006$$

$$\begin{array}{r} 34 \\ \times 59 \\ \hline 306 \\ 170 \\ \hline 2006 \end{array}$$

2006 km²

③



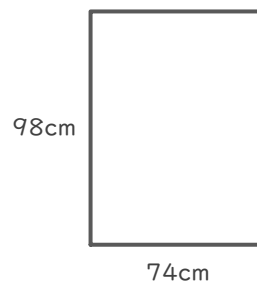
(式)

$$73 \times 73 = 5329$$

$$\begin{array}{r} 73 \\ \times 73 \\ \hline 219 \\ 511 \\ \hline 5329 \end{array}$$

5329 m²

④



(式)

$$98 \times 74 = 7252$$

$$\begin{array}{r} 98 \\ \times 74 \\ \hline 392 \\ 686 \\ \hline 7252 \end{array}$$

7252 cm²