

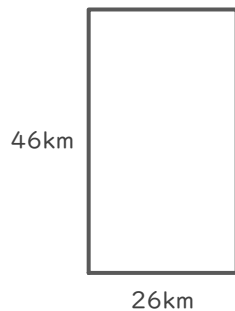
長方形や正方形の面積

____年 ____組 名前

/ 4

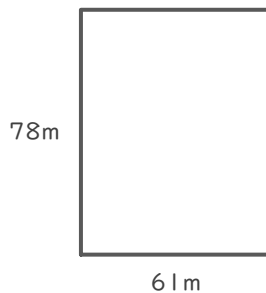
■ 次の長方形や正方形の面積を求めましょう。

①



(式)

②



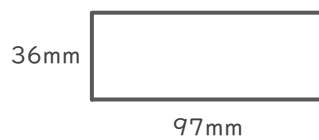
(式)

③



(式)

④



(式)

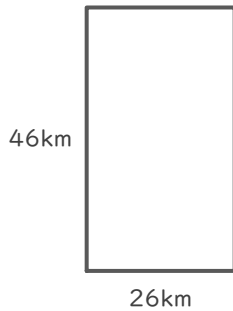
長方形や正方形の面積

____年 ____組 名前

/ 4

■ 次の長方形や正方形の面積を求めましょう。

①



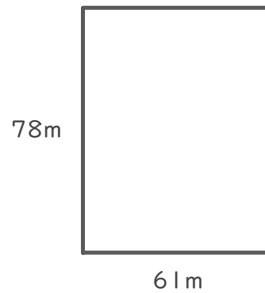
(式)

$$46 \times 26 = 1196$$

$$\begin{array}{r} 46 \\ \times 26 \\ \hline 276 \\ 92 \\ \hline 1196 \end{array}$$

1196 km²

②



(式)

$$78 \times 61 = 4758$$

$$\begin{array}{r} 78 \\ \times 61 \\ \hline 78 \\ 468 \\ \hline 4758 \end{array}$$

4758 m²

③



(式)

$$23 \times 23 = 529$$

$$\begin{array}{r} 23 \\ \times 23 \\ \hline 69 \\ 46 \\ \hline 529 \end{array}$$

529 cm²

④



(式)

$$36 \times 97 = 3492$$

$$\begin{array}{r} 36 \\ \times 97 \\ \hline 252 \\ 324 \\ \hline 3492 \end{array}$$

3492 mm²