

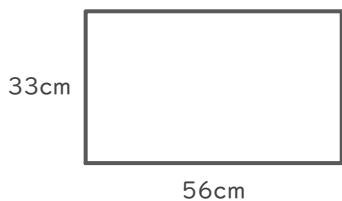
長方形や正方形の面積

____年 ____組 名前

/ 4

■ 次の長方形や正方形の面積を求めましょう。

①



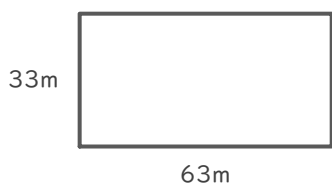
(式)

②



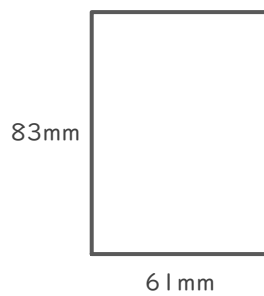
(式)

③



(式)

④



(式)

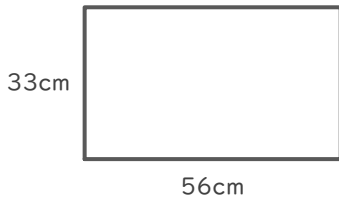
長方形や正方形の面積

____年 ____組 名前 _____

/ 4

■ 次の長方形や正方形の面積を求めましょう。

①



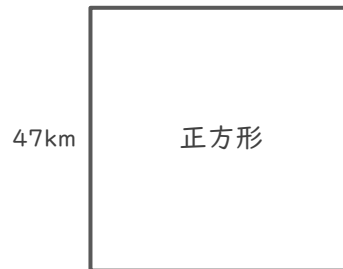
(式)

$$33 \times 56 = 1848$$

$$\begin{array}{r} 33 \\ \times 56 \\ \hline 198 \\ 1650 \\ \hline 1848 \end{array}$$

1848 cm²

②



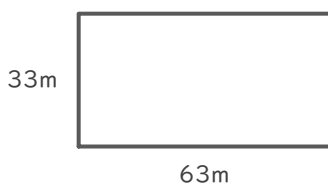
(式)

$$47 \times 47 = 2209$$

$$\begin{array}{r} 47 \\ \times 47 \\ \hline 329 \\ 1880 \\ \hline 2209 \end{array}$$

2209 km²

③



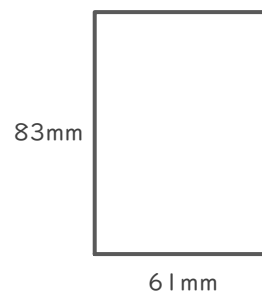
(式)

$$33 \times 63 = 2079$$

$$\begin{array}{r} 33 \\ \times 63 \\ \hline 99 \\ 1980 \\ \hline 2079 \end{array}$$

2079 m²

④



(式)

$$83 \times 61 = 5063$$

$$\begin{array}{r} 83 \\ \times 61 \\ \hline 83 \\ 4980 \\ \hline 5063 \end{array}$$

5063 mm²