

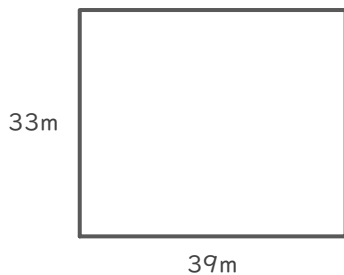
長方形や正方形の面積

____年 ____組 名前

/ 4


■ 次の長方形や正方形の面積を求めましょう。

①



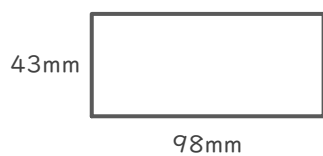
(式)

②



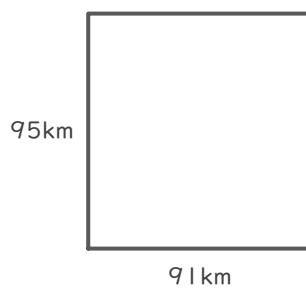
(式)

③



(式)

④



(式)

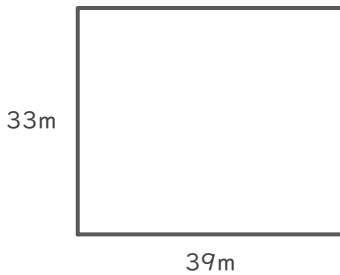
長方形や正方形の面積

____年 ____組 名前

/ 4

■ 次の長方形や正方形の面積を求めましょう。

①




(式)

$$33 \times 39 = 1287$$

$$\begin{array}{r} 33 \\ \times 39 \\ \hline 297 \\ 99 \\ \hline 1287 \end{array}$$

1287 m²

②



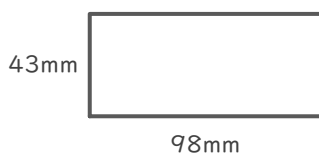
(式)

$$84 \times 84 = 7056$$

$$\begin{array}{r} 84 \\ \times 84 \\ \hline 336 \\ 672 \\ \hline 7056 \end{array}$$

7056 cm²

③



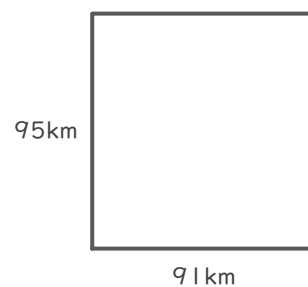
(式)

$$43 \times 98 = 4214$$

$$\begin{array}{r} 43 \\ \times 98 \\ \hline 344 \\ 387 \\ \hline 4214 \end{array}$$

4214 mm²

④



(式)

$$95 \times 91 = 8645$$

$$\begin{array}{r} 95 \\ \times 91 \\ \hline 95 \\ 855 \\ \hline 8645 \end{array}$$

8645 km²