

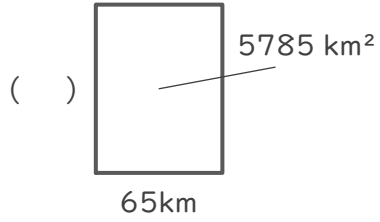
# 長方形や正方形の面積

年 組 名前

/ 4

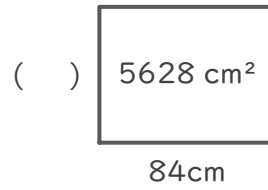
■ つぎの( )にあてはまる長さをそれぞれ答えましょう。

①



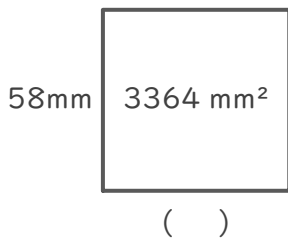
(式)

②



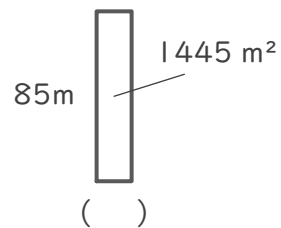
(式)

③



(式)

④



(式)

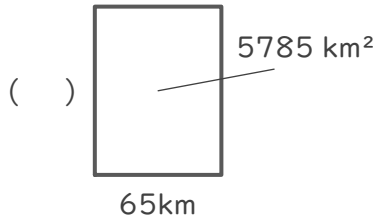
# 長方形や正方形の面積

年 組 名前

/ 4

■ つぎの( )にあてはまる長さをそれぞれ答えましょう。

①



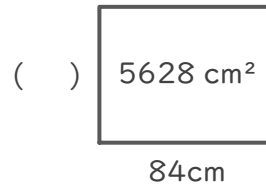
(式)

$$5785 \div 65 = 89$$

$$\begin{array}{r} 89 \\ 65 \overline{) 5785} \\ \underline{520} \phantom{0} \\ 585 \\ \underline{585} \\ 0 \end{array}$$

89 km

②



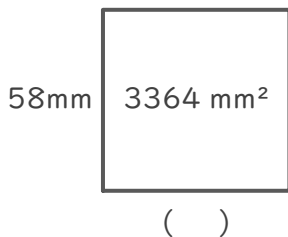
(式)

$$5628 \div 84 = 67$$

$$\begin{array}{r} 67 \\ 84 \overline{) 5628} \\ \underline{504} \phantom{0} \\ 588 \\ \underline{588} \\ 0 \end{array}$$

67 cm

③



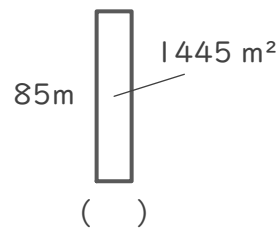
(式)

$$3364 \div 58 = 58$$

$$\begin{array}{r} 58 \\ 58 \overline{) 3364} \\ \underline{290} \phantom{0} \\ 464 \\ \underline{464} \\ 0 \end{array}$$

58 mm

④



(式)

$$1445 \div 85 = 17$$

$$\begin{array}{r} 17 \\ 85 \overline{) 1445} \\ \underline{85} \phantom{0} \\ 595 \\ \underline{595} \\ 0 \end{array}$$

17 m