

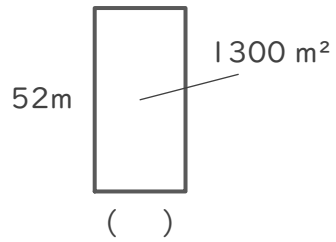
長方形や正方形の面積

年 組 名前

/ 4

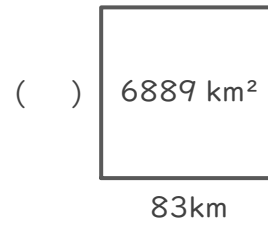
■ つぎの()にあてはまる長さをそれぞれ答えましょう。

①



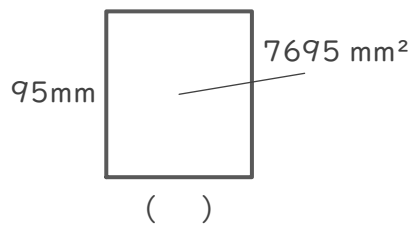
(式)

②



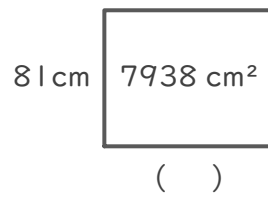
(式)

③



(式)

④



(式)

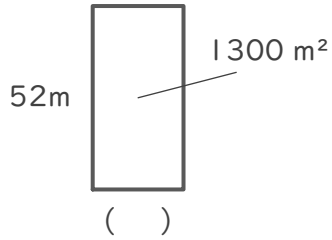
長方形や正方形の面積

年 組 名前

/ 4

■ つぎの () にあてはまる長さをそれぞれ答えましょう。

①



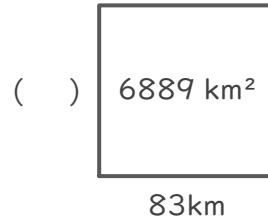
(式)

$$1300 \div 52 = 25$$

$$\begin{array}{r} 25 \\ 52 \overline{) 1300} \\ \underline{104} \\ 260 \\ \underline{260} \\ 0 \end{array}$$

25 m

②



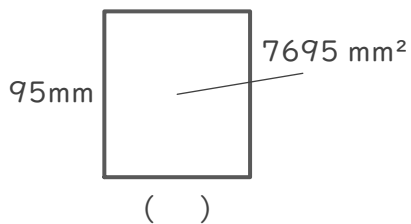
(式)

$$6889 \div 83 = 83$$

$$\begin{array}{r} 83 \\ 83 \overline{) 6889} \\ \underline{664} \\ 249 \\ \underline{249} \\ 0 \end{array}$$

83 km

③



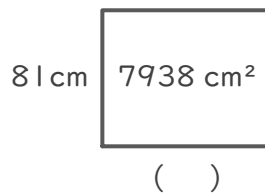
(式)

$$7695 \div 95 = 81$$

$$\begin{array}{r} 81 \\ 95 \overline{) 7695} \\ \underline{760} \\ 95 \\ \underline{95} \\ 0 \end{array}$$

81 mm

④



(式)

$$7938 \div 81 = 98$$

$$\begin{array}{r} 98 \\ 81 \overline{) 7938} \\ \underline{729} \\ 648 \\ \underline{648} \\ 0 \end{array}$$

98 cm