

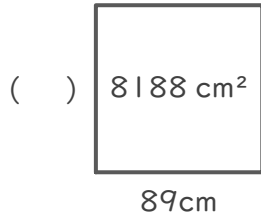
長方形や正方形の面積

年 組 名前

/ 4

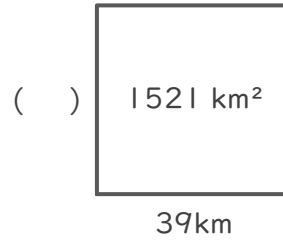
■ つぎの()にあてはまる長さをそれぞれ答えましょう。

①



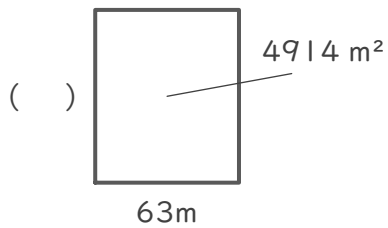
(式)

②



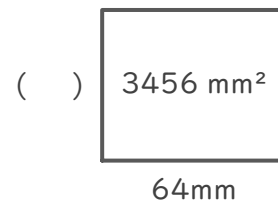
(式)

③



(式)

④



(式)

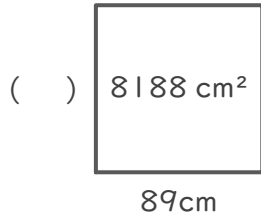
長方形や正方形の面積

年 組 名前

/ 4

■ つぎの()にあてはまる長さをそれぞれ答えましょう。

①

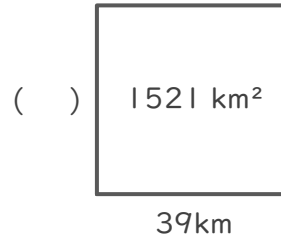


(式) $8188 \div 89 = 92$

$$\begin{array}{r} 92 \\ 89 \overline{) 8188} \\ \underline{801} \\ 178 \\ \underline{178} \\ 0 \end{array}$$

92 cm

②

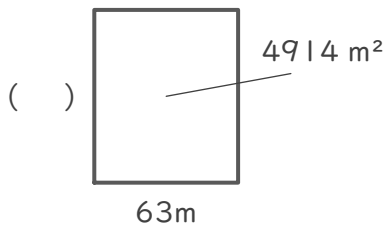


(式) $1521 \div 39 = 39$

$$\begin{array}{r} 39 \\ 39 \overline{) 1521} \\ \underline{117} \\ 351 \\ \underline{351} \\ 0 \end{array}$$

39 km

③

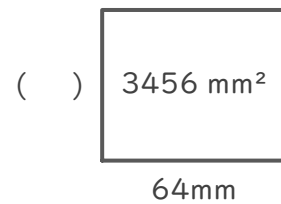


(式) $4914 \div 63 = 78$

$$\begin{array}{r} 78 \\ 63 \overline{) 4914} \\ \underline{441} \\ 504 \\ \underline{504} \\ 0 \end{array}$$

78 m

④



(式) $3456 \div 64 = 54$

$$\begin{array}{r} 54 \\ 64 \overline{) 3456} \\ \underline{320} \\ 256 \\ \underline{256} \\ 0 \end{array}$$

54 mm