

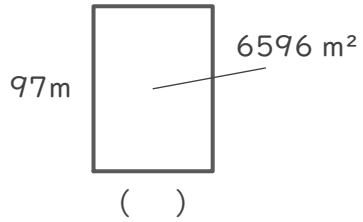
長方形や正方形の面積

年 組 名前

/ 4

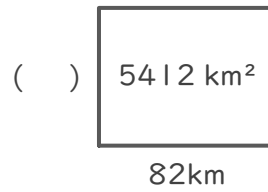
■ つぎの()にあてはまる長さをそれぞれ答えましょう。

①



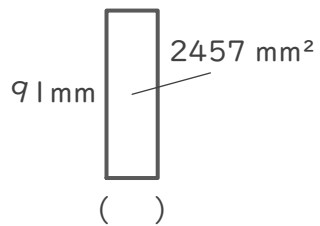
(式)

②



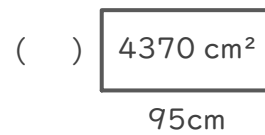
(式)

③



(式)

④



(式)

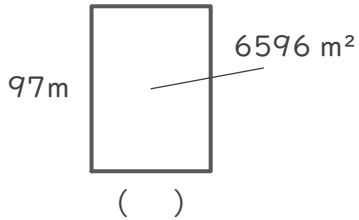
長方形や正方形の面積

年 組 名前

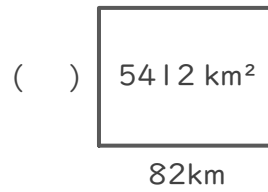
/ 4

■ つぎの () にあてはまる長さをそれぞれ答えましょう。

①



②



(式)

$$6596 \div 97 = 68$$

(式)

$$5412 \div 82 = 66$$

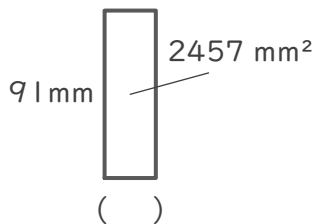
$$\begin{array}{r} 68 \\ 97 \overline{) 6596} \\ \underline{582} \\ 776 \\ \underline{776} \\ 0 \end{array}$$

$$\begin{array}{r} 66 \\ 82 \overline{) 5412} \\ \underline{492} \\ 492 \\ \underline{492} \\ 0 \end{array}$$

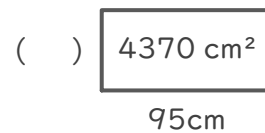
68 m

66 km

③



④



(式)

$$2457 \div 91 = 27$$

(式)

$$4370 \div 95 = 46$$

$$\begin{array}{r} 27 \\ 91 \overline{) 2457} \\ \underline{182} \\ 637 \\ \underline{637} \\ 0 \end{array}$$

$$\begin{array}{r} 46 \\ 95 \overline{) 4370} \\ \underline{380} \\ 570 \\ \underline{570} \\ 0 \end{array}$$

27 mm

46 cm