

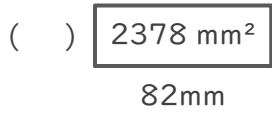
長方形や正方形の面積

年 組 名前

/ 4

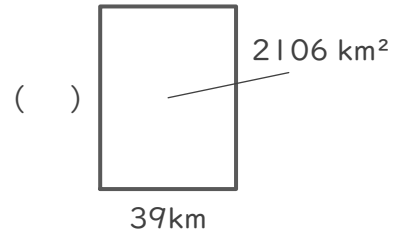
■ つぎの()にあてはまる長さをそれぞれ答えましょう。

①



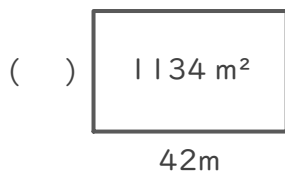
(式)

②



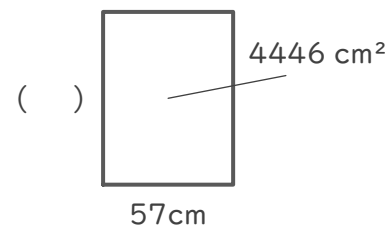
(式)

③



(式)

④



(式)

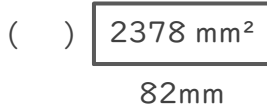
長方形や正方形の面積

年 組 名前

/ 4

■ つぎの()にあてはまる長さをそれぞれ答えましょう。

①

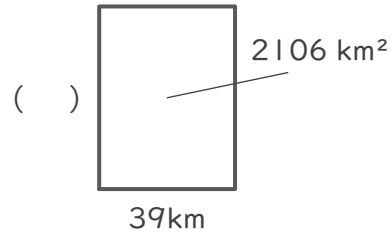


(式) $2378 \div 82 = 29$

$$\begin{array}{r} 29 \\ 82 \overline{) 2378} \\ \underline{164} \\ 738 \\ \underline{738} \\ 0 \end{array}$$

29 mm

②

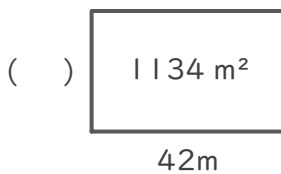


(式) $2106 \div 39 = 54$

$$\begin{array}{r} 54 \\ 39 \overline{) 2106} \\ \underline{195} \\ 156 \\ \underline{156} \\ 0 \end{array}$$

54 km

③

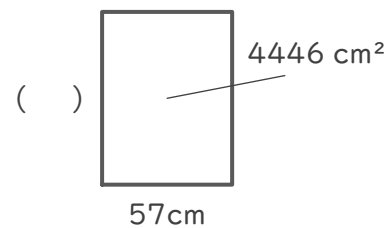


(式) $1134 \div 42 = 27$

$$\begin{array}{r} 27 \\ 42 \overline{) 1134} \\ \underline{84} \\ 294 \\ \underline{294} \\ 0 \end{array}$$

27 m

④



(式) $4446 \div 57 = 78$

$$\begin{array}{r} 78 \\ 57 \overline{) 4446} \\ \underline{399} \\ 456 \\ \underline{456} \\ 0 \end{array}$$

78 cm