

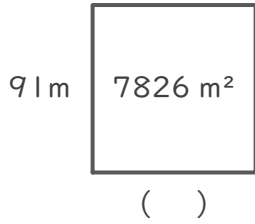
長方形や正方形の面積

年 組 名前

/ 4

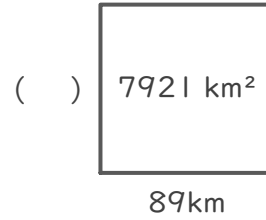
■ つぎの()にあてはまる長さをそれぞれ答えましょう。

①



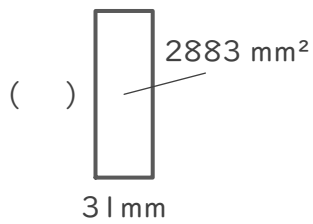
(式)

②



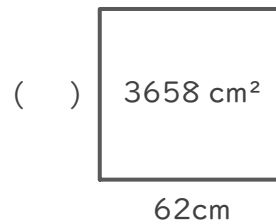
(式)

③



(式)

④



(式)

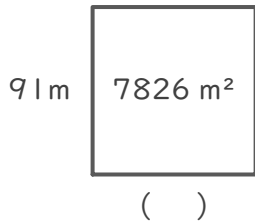
長方形や正方形の面積

年 組 名前

/ 4

■ つぎの () にあてはまる長さをそれぞれ答えましょう。

①

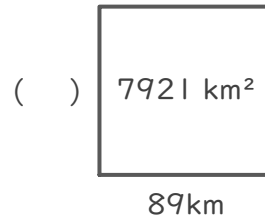


(式) $7826 \div 91 = 86$

$$\begin{array}{r} 86 \\ 91 \overline{) 7826} \\ \underline{728} \\ 546 \\ \underline{546} \\ 0 \end{array}$$

86 m

②

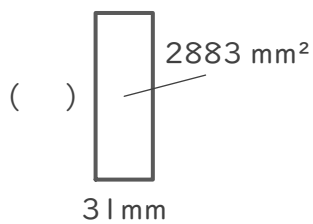


(式) $7921 \div 89 = 89$

$$\begin{array}{r} 89 \\ 89 \overline{) 7921} \\ \underline{712} \\ 801 \\ \underline{801} \\ 0 \end{array}$$

89 km

③

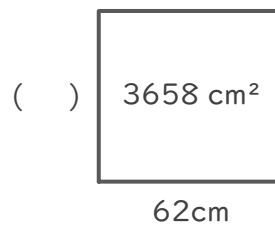


(式) $2883 \div 31 = 93$

$$\begin{array}{r} 93 \\ 31 \overline{) 2883} \\ \underline{279} \\ 93 \\ \underline{93} \\ 0 \end{array}$$

93 mm

④



(式) $3658 \div 62 = 59$

$$\begin{array}{r} 59 \\ 62 \overline{) 3658} \\ \underline{310} \\ 558 \\ \underline{558} \\ 0 \end{array}$$

59 cm