

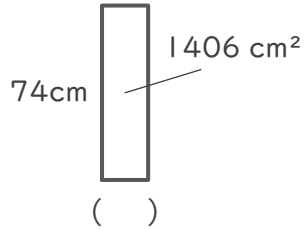
# 長方形や正方形の面積

年 組 名前

/ 4

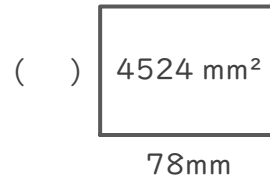
■ つぎの( )にあてはまる長さをそれぞれ答えましょう。

①



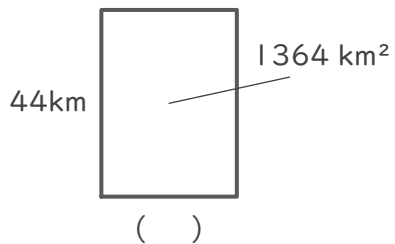
(式)

②



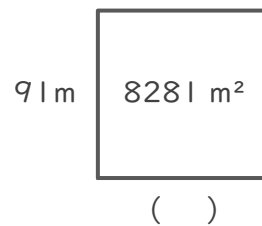
(式)

③



(式)

④



(式)

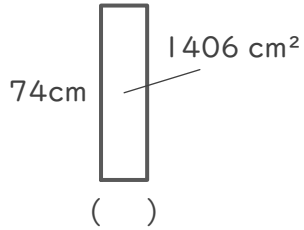
# 長方形や正方形の面積

年 組 名前

/ 4

■ つぎの( )にあてはまる長さをそれぞれ答えましょう。

①



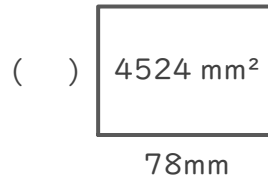
(式)

$$1406 \div 74 = 19$$

$$\begin{array}{r} 19 \\ 74 \overline{) 1406} \\ \underline{74} \phantom{00} \\ 666 \\ \underline{666} \\ 0 \end{array}$$

19 cm

②



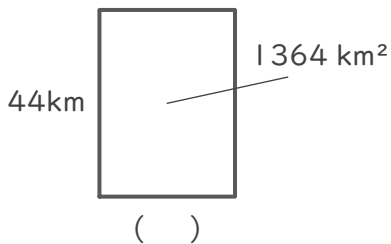
(式)

$$4524 \div 78 = 58$$

$$\begin{array}{r} 58 \\ 78 \overline{) 4524} \\ \underline{390} \phantom{00} \\ 624 \\ \underline{624} \\ 0 \end{array}$$

58 mm

③



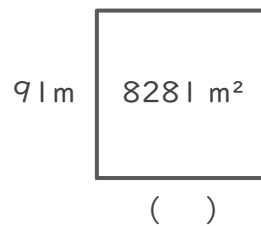
(式)

$$1364 \div 44 = 31$$

$$\begin{array}{r} 31 \\ 44 \overline{) 1364} \\ \underline{132} \phantom{00} \\ 44 \\ \underline{44} \\ 0 \end{array}$$

31 km

④



(式)

$$8281 \div 91 = 91$$

$$\begin{array}{r} 91 \\ 91 \overline{) 8281} \\ \underline{819} \phantom{00} \\ 91 \\ \underline{91} \\ 0 \end{array}$$

91 m