

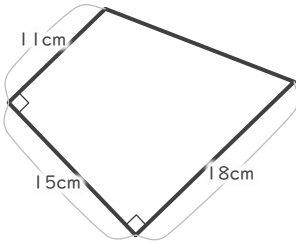
# 台形の面積

年 組 名前

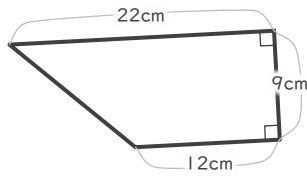
19

■ 次の台形の面積を求めなさい。

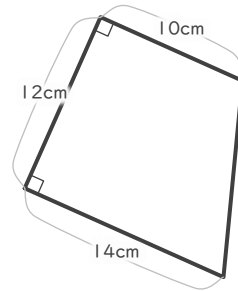
①



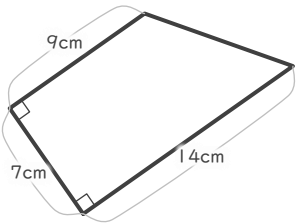

②



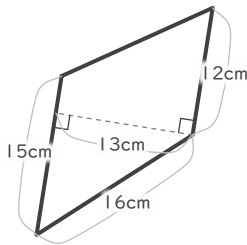

③



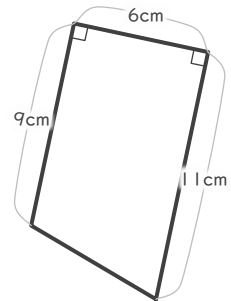

④



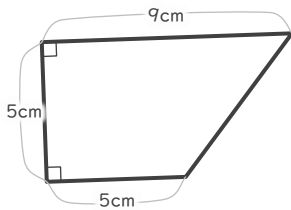

⑤



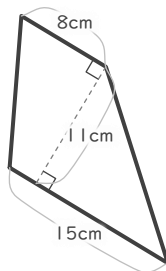

⑥



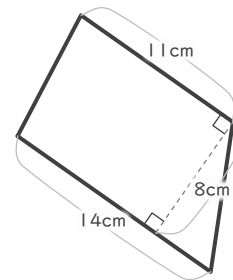

⑦




⑧




⑨



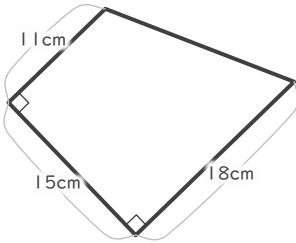
# 台形の面積

年 組 名前

19

■ 次の台形の面積を求めなさい。

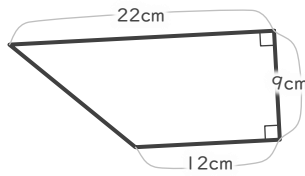
①



$$(11 + 18) \times 15 \div 2 = 217.5$$

217.5 cm<sup>2</sup>

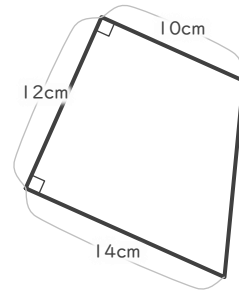
②



$$(12 + 22) \times 9 \div 2 = 153$$

153 cm<sup>2</sup>

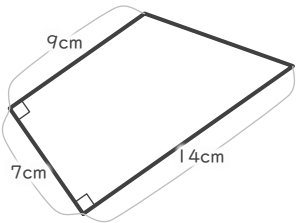
③



$$(10 + 14) \times 12 \div 2 = 144$$

144 cm<sup>2</sup>

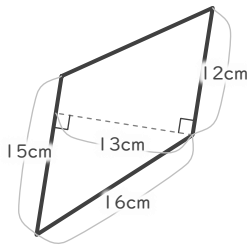
④



$$(9 + 14) \times 7 \div 2 = 80.5$$

80.5 cm<sup>2</sup>

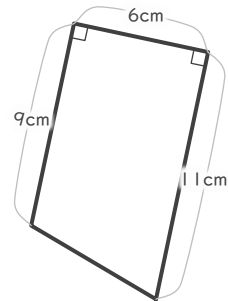
⑤



$$(12 + 15) \times 13 \div 2 = 175.5$$

175.5 cm<sup>2</sup>

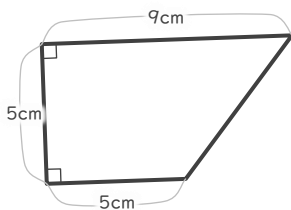
⑥



$$(6 + 11) \times 9 \div 2 = 60$$

60 cm<sup>2</sup>

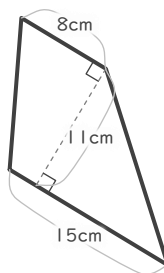
⑦



$$(5 + 9) \times 5 \div 2 = 35$$

35 cm<sup>2</sup>

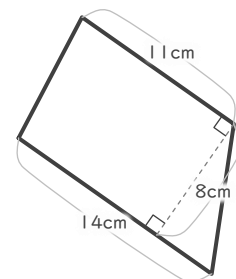
⑧



$$(8 + 15) \times 11 \div 2 = 126.5$$

126.5 cm<sup>2</sup>

⑨



$$(11 + 14) \times 8 \div 2 = 100$$

100 cm<sup>2</sup>