

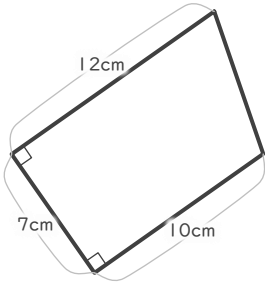
# 台形の面積

年 組 名前

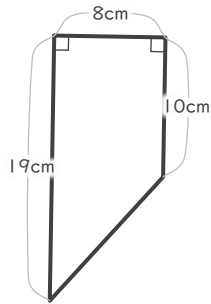
19

■ 次の台形の面積を求めなさい。

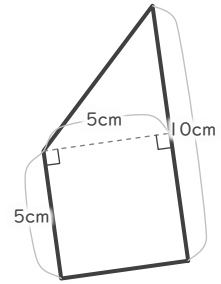
①



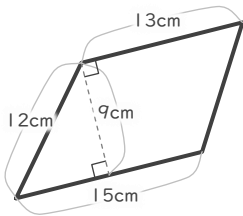

②



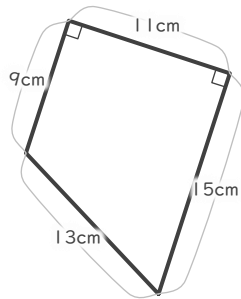

③



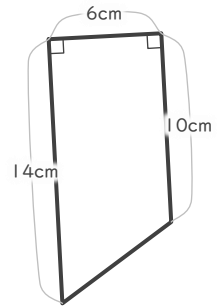

④



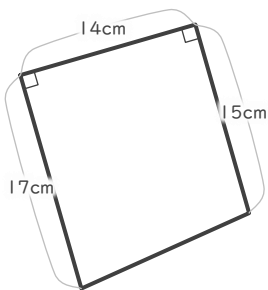

⑤



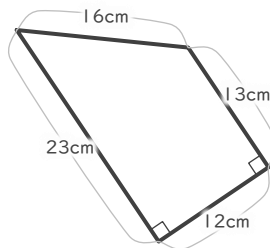

⑥



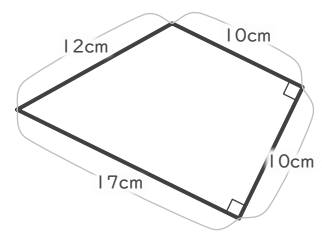

⑦




⑧




⑨



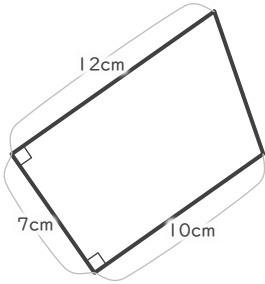
# 台形の面積

年 組 名前

19

■ 次の台形の面積を求めなさい。

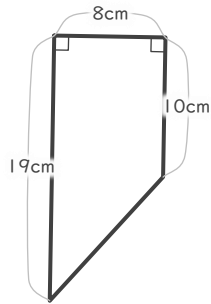
①



$$(10 + 12) \times 7 \div 2 = 77$$

77 cm<sup>2</sup>

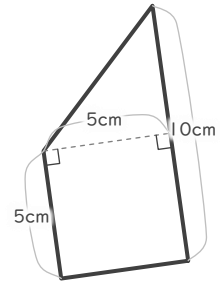
②



$$(10 + 19) \times 8 \div 2 = 116$$

116 cm<sup>2</sup>

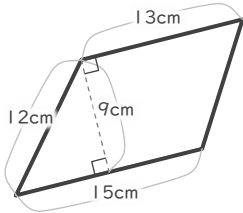
③



$$(5 + 10) \times 5 \div 2 = 37.5$$

37.5 cm<sup>2</sup>

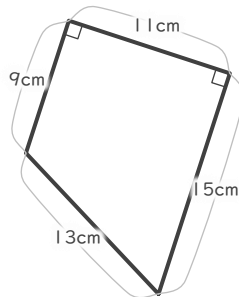
④



$$(13 + 15) \times 9 \div 2 = 126$$

126 cm<sup>2</sup>

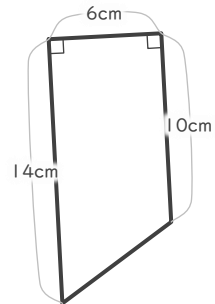
⑤



$$(9 + 15) \times 11 \div 2 = 132$$

132 cm<sup>2</sup>

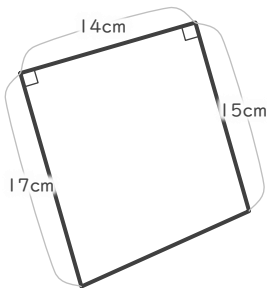
⑥



$$(10 + 14) \times 6 \div 2 = 72$$

72 cm<sup>2</sup>

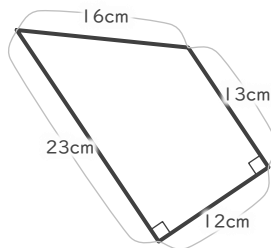
⑦



$$(15 + 17) \times 14 \div 2 = 224$$

224 cm<sup>2</sup>

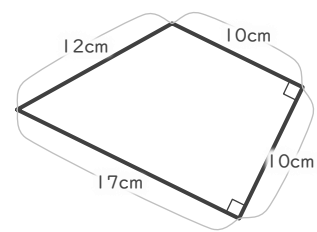
⑧



$$(13 + 23) \times 12 \div 2 = 216$$

216 cm<sup>2</sup>

⑨



$$(10 + 17) \times 10 \div 2 = 135$$

135 cm<sup>2</sup>