

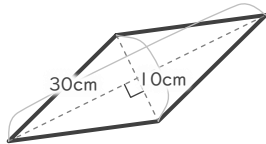
# ひし形の面積

年 組 名前

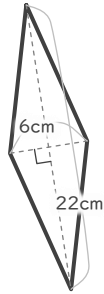
19

■ 次のひし形の面積を求めなさい。

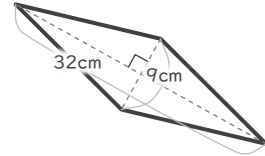
①



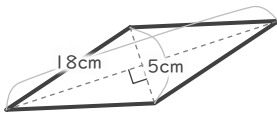
②



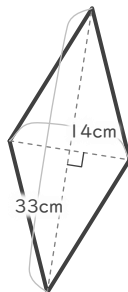
③



④



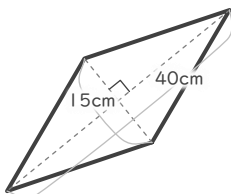
⑤



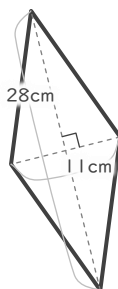
⑥



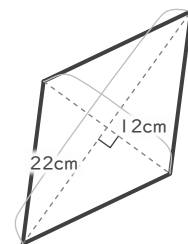
⑦



⑧



⑨



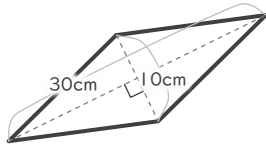
# ひし形の面積

年 組 名前

19

■ 次のひし形の面積を求めなさい。

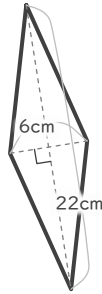
①



$$10 \times 30 \div 2 = 150$$

150 cm<sup>2</sup>

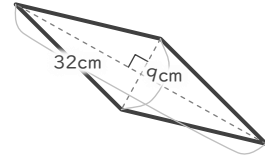
②



$$22 \times 6 \div 2 = 66$$

66 cm<sup>2</sup>

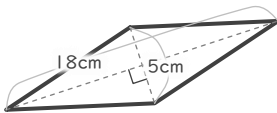
③



$$32 \times 9 \div 2 = 144$$

144 cm<sup>2</sup>

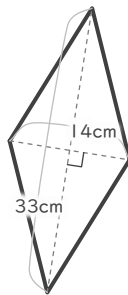
④



$$5 \times 18 \div 2 = 45$$

45 cm<sup>2</sup>

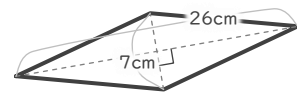
⑤



$$14 \times 33 \div 2 = 231$$

231 cm<sup>2</sup>

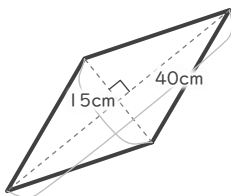
⑥



$$26 \times 7 \div 2 = 91$$

91 cm<sup>2</sup>

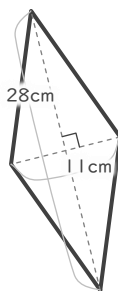
⑦



$$15 \times 40 \div 2 = 300$$

300 cm<sup>2</sup>

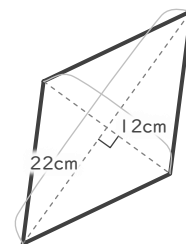
⑧



$$28 \times 11 \div 2 = 154$$

154 cm<sup>2</sup>

⑨



$$12 \times 22 \div 2 = 132$$

132 cm<sup>2</sup>