

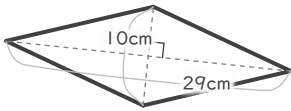
ひし形の面積

年 組 名前

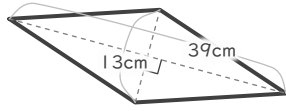
19

■ 次のひし形の面積を求めなさい。

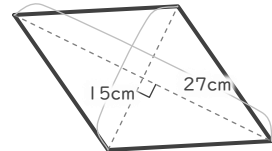
①



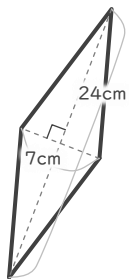
②



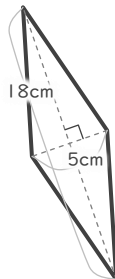
③



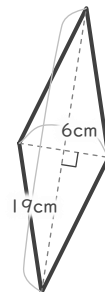
④



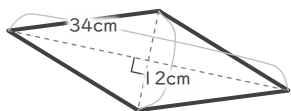
⑤



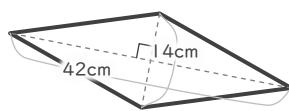
⑥



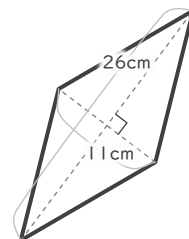
⑦



⑧



⑨



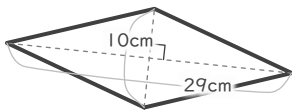
ひし形の面積

年 組 名前

19

■ 次のひし形の面積を求めなさい。

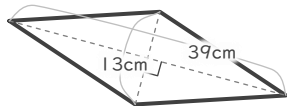
①



$$10 \times 29 \div 2 = 145$$

145 cm²

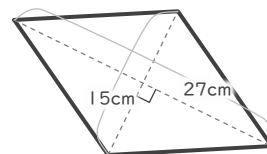
②



$$39 \times 13 \div 2 = 253.5$$

253.5 cm²

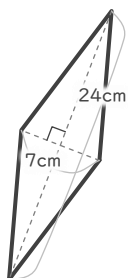
③



$$27 \times 15 \div 2 = 202.5$$

202.5 cm²

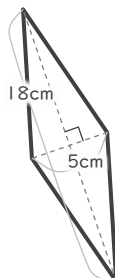
④



$$7 \times 24 \div 2 = 84$$

84 cm²

⑤



$$18 \times 5 \div 2 = 45$$

45 cm²

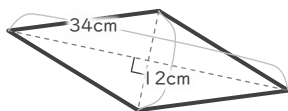
⑥



$$6 \times 19 \div 2 = 57$$

57 cm²

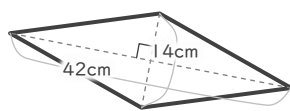
⑦



$$12 \times 34 \div 2 = 204$$

204 cm²

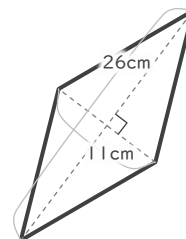
⑧



$$42 \times 14 \div 2 = 294$$

294 cm²

⑨



$$26 \times 11 \div 2 = 143$$

143 cm²