

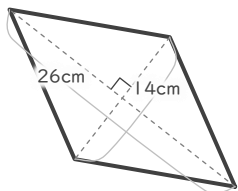
# ひし形の面積

年 組 名前

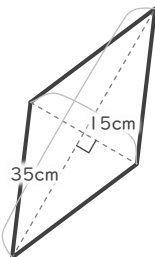
19

■ 次のひし形の面積を求めなさい。

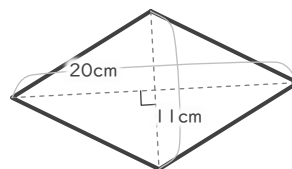
①



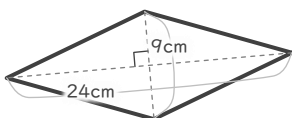
②



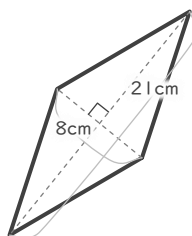
③



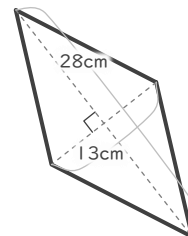
④



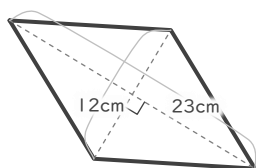
⑤



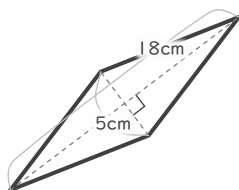
⑥



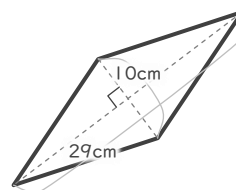
⑦



⑧



⑨



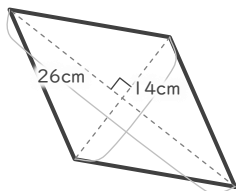
# ひし形の面積

年 組 名前

19

■ 次のひし形の面積を求めなさい。

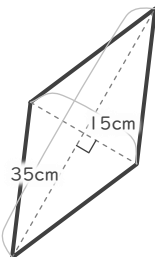
①



$$26 \times 14 \div 2 = 182$$

182 cm<sup>2</sup>

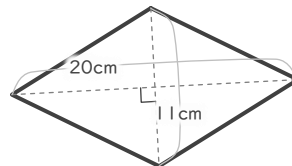
②



$$15 \times 35 \div 2 = 262.5$$

262.5 cm<sup>2</sup>

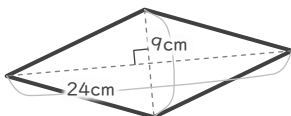
③



$$11 \times 20 \div 2 = 110$$

110 cm<sup>2</sup>

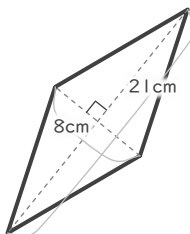
④



$$24 \times 9 \div 2 = 108$$

108 cm<sup>2</sup>

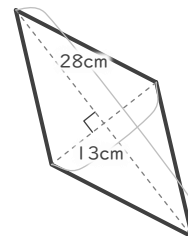
⑤



$$8 \times 21 \div 2 = 84$$

84 cm<sup>2</sup>

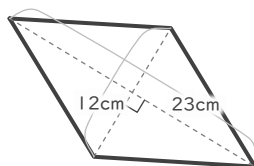
⑥



$$13 \times 28 \div 2 = 182$$

182 cm<sup>2</sup>

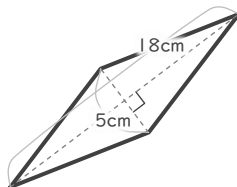
⑦



$$23 \times 12 \div 2 = 138$$

138 cm<sup>2</sup>

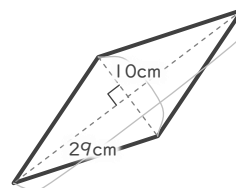
⑧



$$18 \times 5 \div 2 = 45$$

45 cm<sup>2</sup>

⑨



$$29 \times 10 \div 2 = 145$$

145 cm<sup>2</sup>