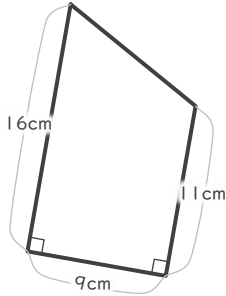


# 三角形や四角形の面積

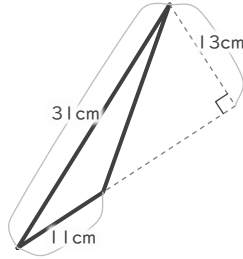
\_\_\_\_年 \_\_\_\_組 名前

■ 次の三角形や四角形の面積を求めなさい。

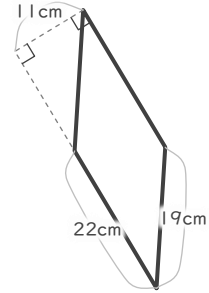
① 台形



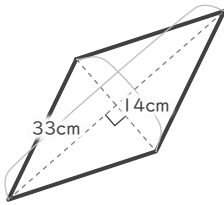

② 三角形



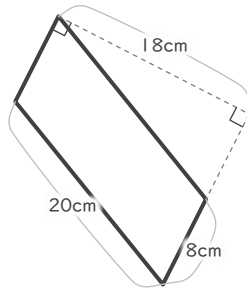

③ 平行四辺形



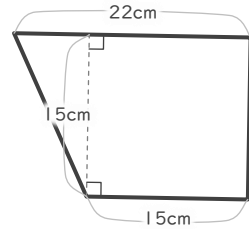

④ ひし形



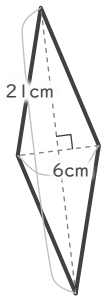

⑤ 平行四辺形



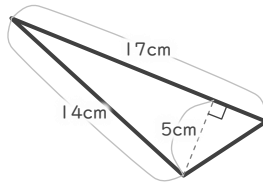

⑥ 台形



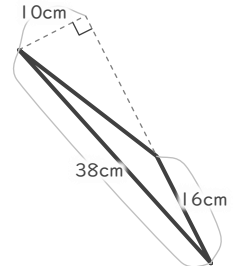

⑦ ひし形




⑧ 三角形




⑨ 三角形



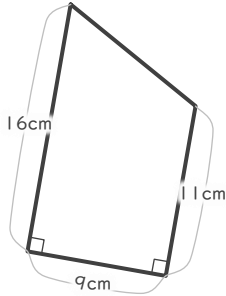
# 三角形や四角形の面積

\_\_\_\_年 \_\_\_\_組 名前

19

■ 次の三角形や四角形の面積を求めなさい。

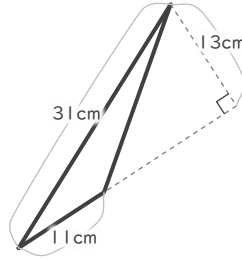
① 台形



$$(11 + 16) \times 9 \div 2 = 121.5$$

121.5 cm<sup>2</sup>

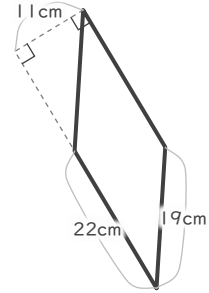
② 三角形



$$11 \times 13 \div 2 = 71.5$$

71.5 cm<sup>2</sup>

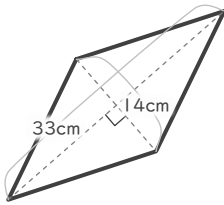
③ 平行四辺形



$$22 \times 11 = 242$$

242 cm<sup>2</sup>

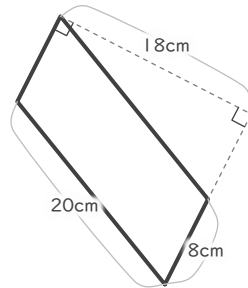
④ ひし形



$$14 \times 33 \div 2 = 231$$

231 cm<sup>2</sup>

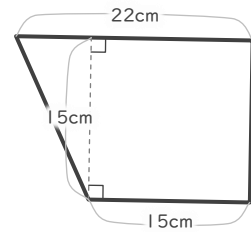
⑤ 平行四辺形



$$8 \times 18 = 144$$

144 cm<sup>2</sup>

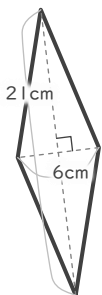
⑥ 台形



$$(15 + 22) \times 5 \div 2 = 277.5$$

277.5 cm<sup>2</sup>

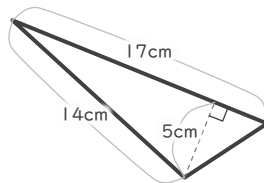
⑦ ひし形



$$21 \times 6 \div 2 = 63$$

63 cm<sup>2</sup>

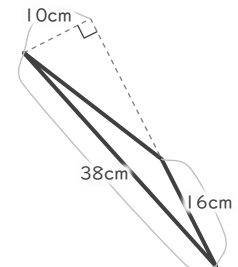
⑧ 三角形



$$17 \times 5 \div 2 = 42.5$$

42.5 cm<sup>2</sup>

⑨ 三角形



$$16 \times 10 \div 2 = 80$$

80 cm<sup>2</sup>