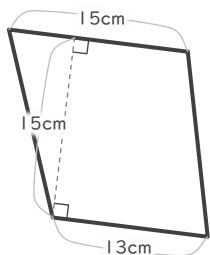


三角形や四角形の面積

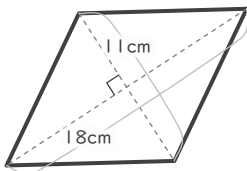
____年 ____組 名前

■ 次の三角形や四角形の面積を求めなさい。

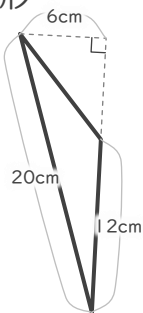
① 台形



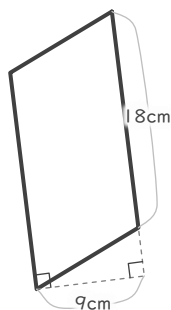
② ひし形



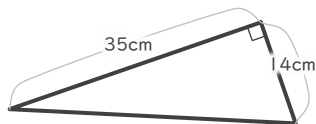
③ 三角形



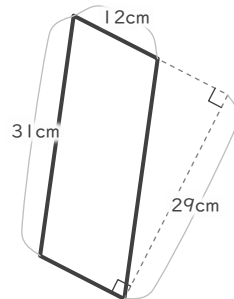
④ 平行四辺形



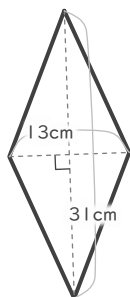
⑤ 三角形



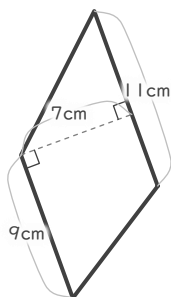
⑥ 平行四辺形



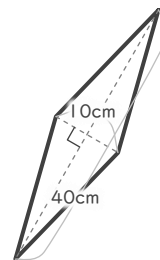
⑦ ひし形



⑧ 台形



⑨ ひし形



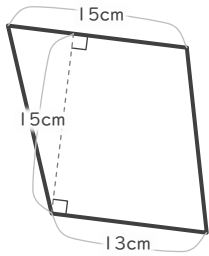
三角形や四角形の面積

____年 ____組 名前

19

■ 次の三角形や四角形の面積を求めなさい。

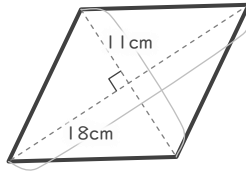
① 台形



$$(13 + 15) \times 15 \div 2 = 210$$

210 cm²

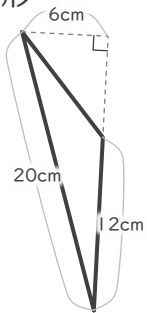
② ひし形



$$18 \times 11 \div 2 = 99$$

99 cm²

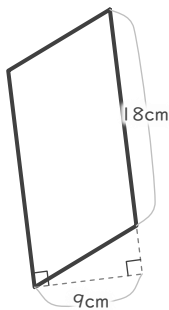
③ 三角形



$$12 \times 6 \div 2 = 36$$

36 cm²

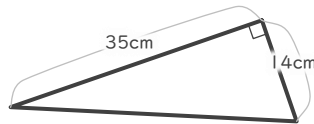
④ 平行四辺形



$$18 \times 9 = 162$$

162 cm²

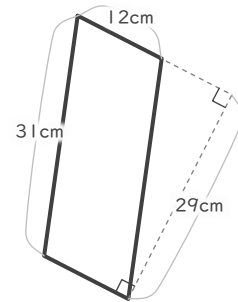
⑤ 三角形



$$14 \times 35 \div 2 = 245$$

245 cm²

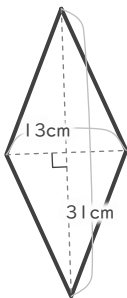
⑥ 平行四辺形



$$12 \times 29 = 348$$

348 cm²

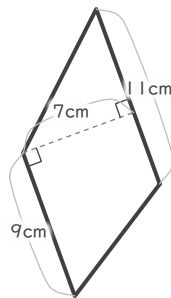
⑦ ひし形



$$31 \times 13 \div 2 = 201.5$$

201.5 cm²

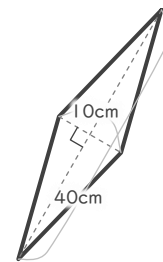
⑧ 台形



$$(9 + 11) \times 7 \div 2 = 70$$

70 cm²

⑨ ひし形



$$40 \times 10 \div 2 = 200$$

200 cm²