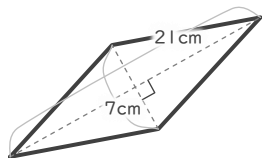


三角形や四角形の面積

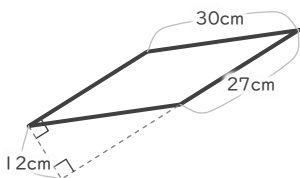
____年 ____組 名前

■ 次の三角形や四角形の面積を求めなさい。

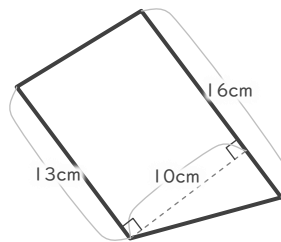
① ひし形



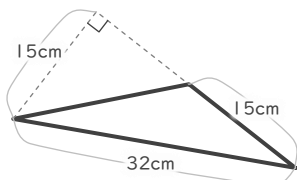
② 平行四辺形



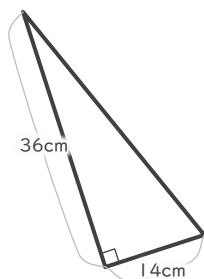
③ 台形



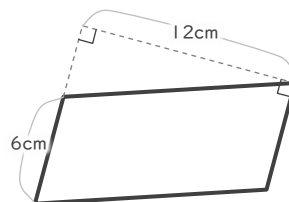
④ 三角形



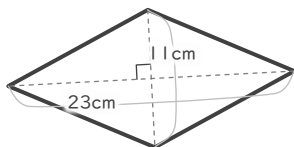
⑤ 三角形



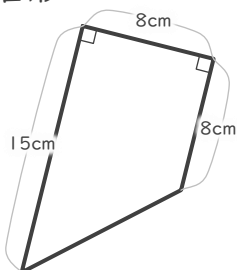
⑥ 平行四辺形



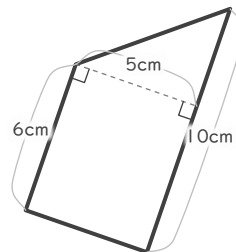
⑦ ひし形



⑧ 台形



⑨ 台形



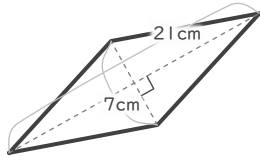
三角形や四角形の面積

年 組 名前

19

■ 次の三角形や四角形の面積を求めなさい。

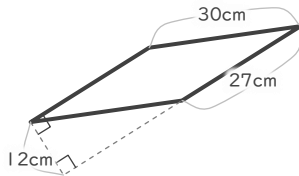
① ひし形



$$21 \times 7 \div 2 = 73.5$$

$$73.5 \text{ cm}^2$$

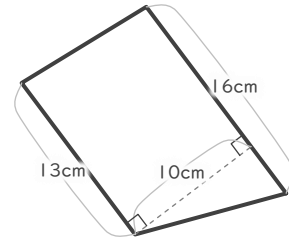
② 平行四辺形



$$27 \times 12 = 324$$

$$324 \text{ cm}^2$$

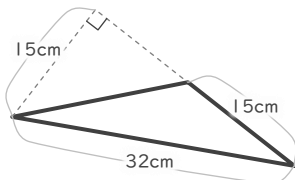
③ 台形



$$(13 + 16) \times 10 \div 2 = 145$$

$$145 \text{ cm}^2$$

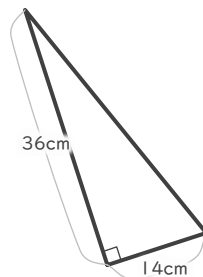
④ 三角形



$$15 \times 15 \div 2 = 112.5$$

$$112.5 \text{ cm}^2$$

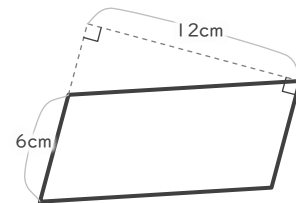
⑤ 三角形



$$36 \times 14 \div 2 = 252$$

$$252 \text{ cm}^2$$

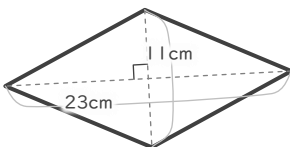
⑥ 平行四辺形



$$6 \times 12 = 72$$

$$72 \text{ cm}^2$$

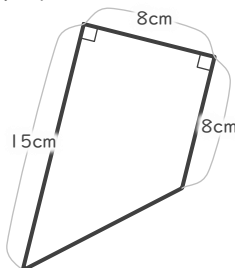
⑦ ひし形



$$23 \times 11 \div 2 = 126.5$$

$$126.5 \text{ cm}^2$$

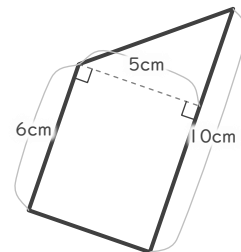
⑧ 台形



$$(8 + 15) \times 8 \div 2 = 92$$

$$92 \text{ cm}^2$$

⑨ 台形



$$(6 + 10) \times 5 \div 2 = 40$$

$$40 \text{ cm}^2$$