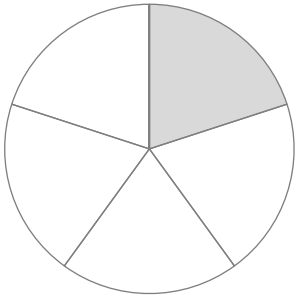
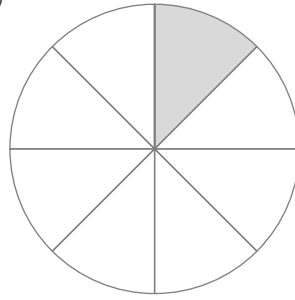


■ 色がついた部分は、円全体の 何分の 1 の大きさですか。

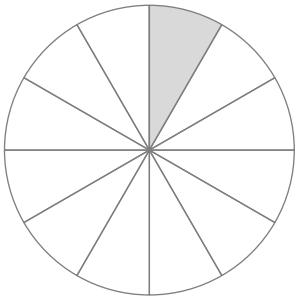
①



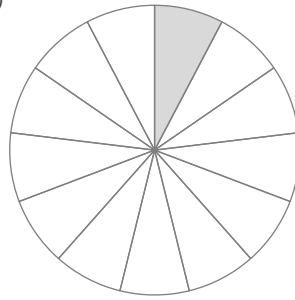
⑤



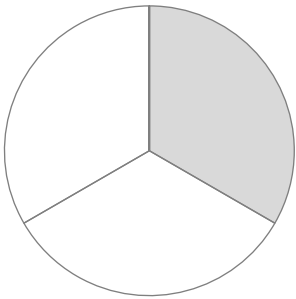
②



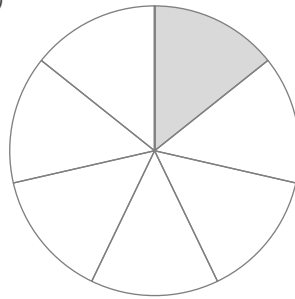
⑥



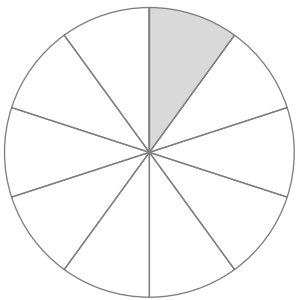
③



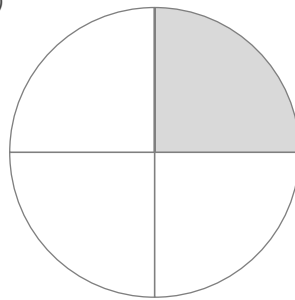
⑦



④

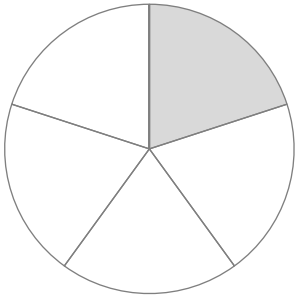


⑧



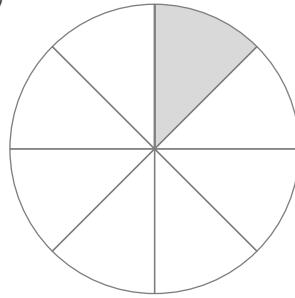
■ 色がついた部分は、円全体の 何分の 1 の大きさですか。

①



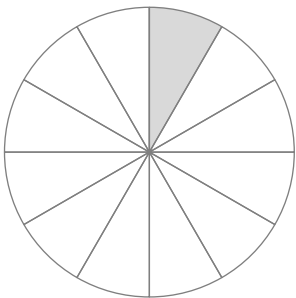
$$\frac{1}{5}$$

⑤



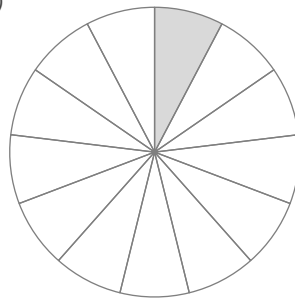
$$\frac{1}{8}$$

②



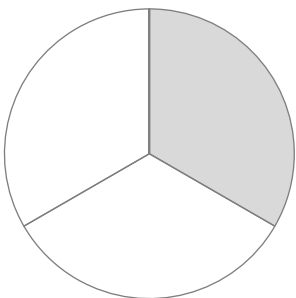
$$\frac{1}{12}$$

⑥



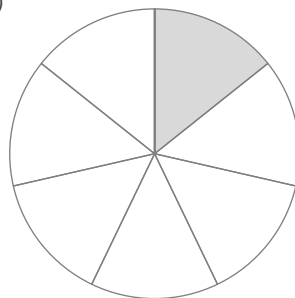
$$\frac{1}{13}$$

③



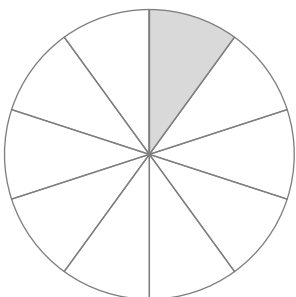
$$\frac{1}{3}$$

⑦



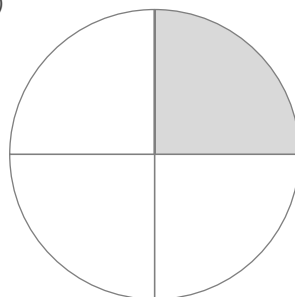
$$\frac{1}{7}$$

④



$$\frac{1}{10}$$

⑧



$$\frac{1}{4}$$