

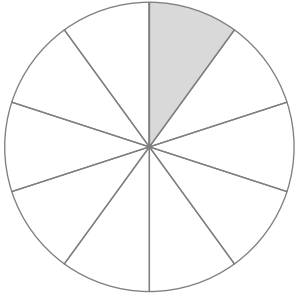
分数

年 組 名前

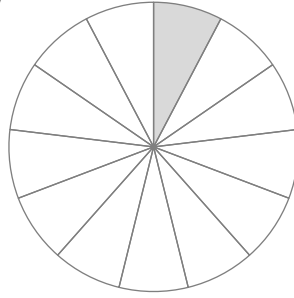
/ 8

■ 色がついた部分は、円全体の 何分の 1 の大きさですか。

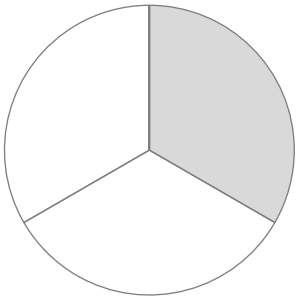
①



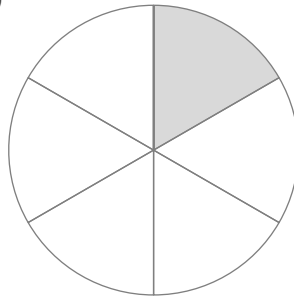
⑤



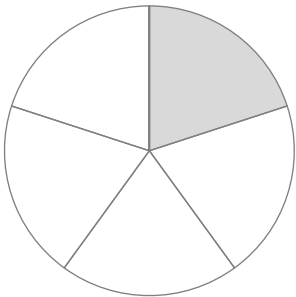
②



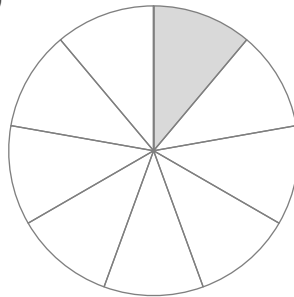
⑥



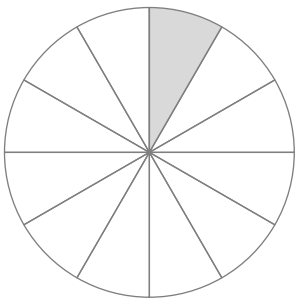
③



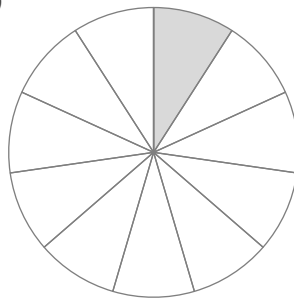
⑦



④

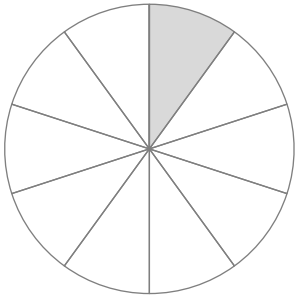


⑧



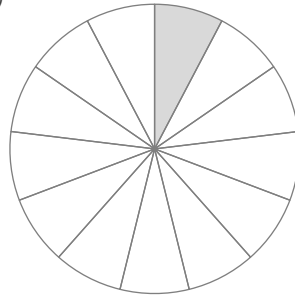
■ 色がついた部分は、円全体の 何分の 1 の大きさですか。

①



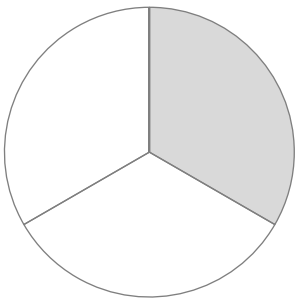
$$\frac{1}{10}$$

⑤



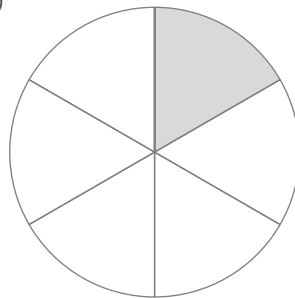
$$\frac{1}{13}$$

②



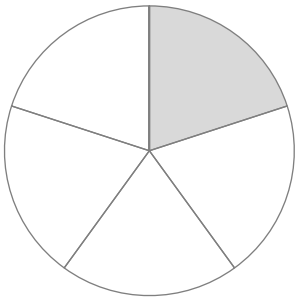
$$\frac{1}{3}$$

⑥



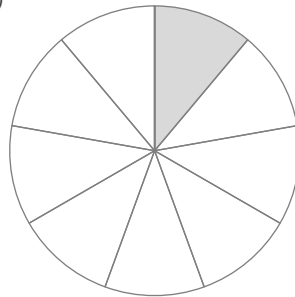
$$\frac{1}{6}$$

③



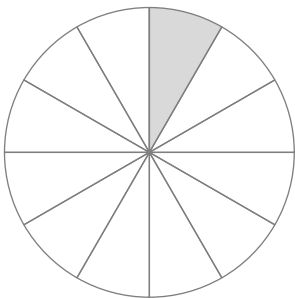
$$\frac{1}{5}$$

⑦



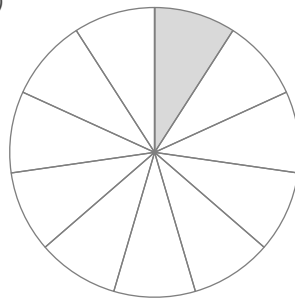
$$\frac{1}{9}$$

④



$$\frac{1}{12}$$

⑧



$$\frac{1}{11}$$