

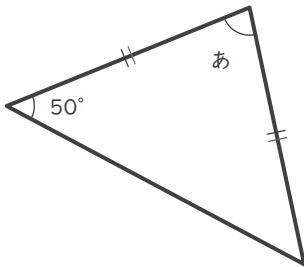
三角形の角の大きさ

____年 ____組 名前

____ / 9

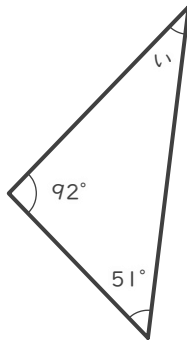
■ つぎの三角形の あ～け の角の大きさを答えましょう。

①



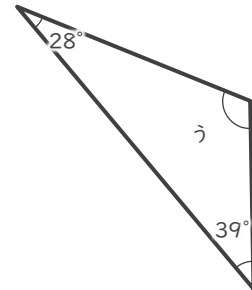
あ

②



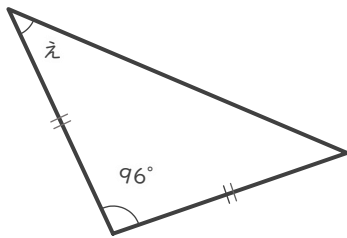
い

③



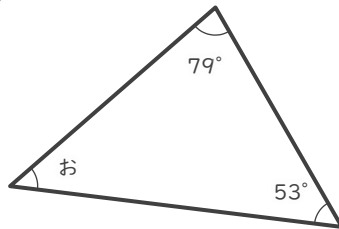
う

④



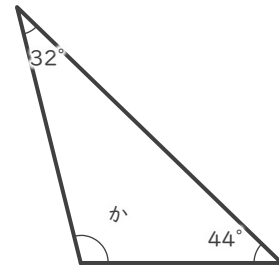
え

⑤



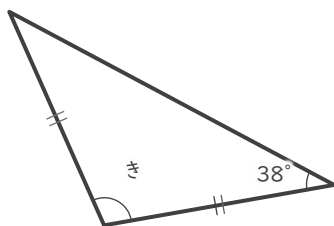
お

⑥



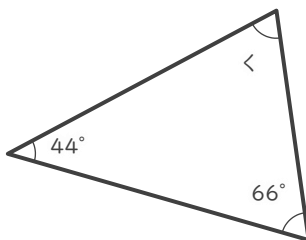
か

⑦



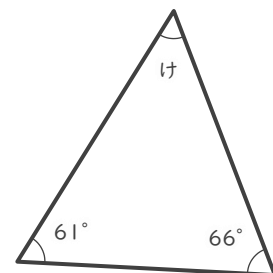
き

⑧



く

⑨



け

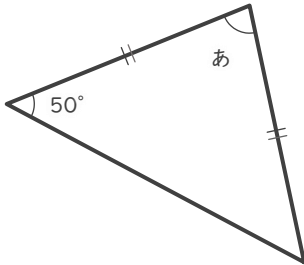
三角形の角の大きさ

年 組 名前

/ 9

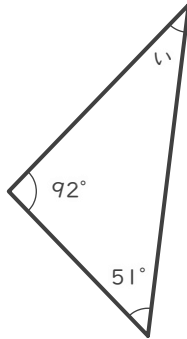
■ つぎの三角形の あ～け の角の大きさを答えましょう。

①



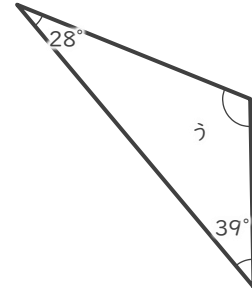
あ 80°

②



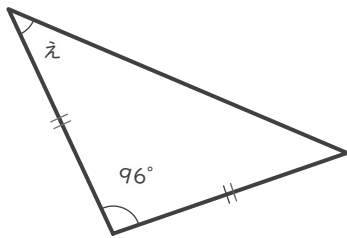
い 37°

③



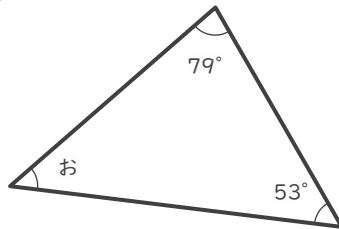
う 113°

④



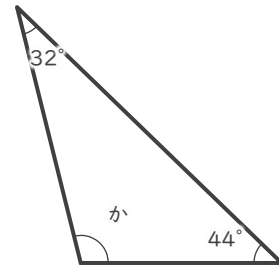
え 42°

⑤



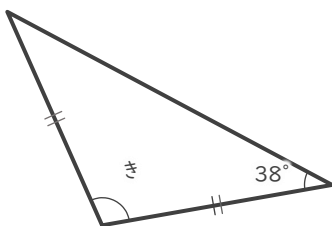
お 48°

⑥



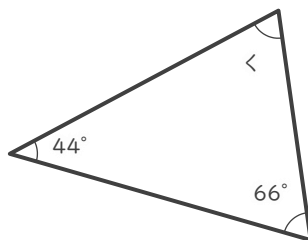
か 104°

⑦



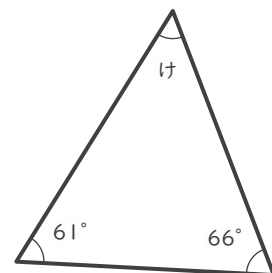
き 104°

⑧



く 70°

⑨



け 53°