

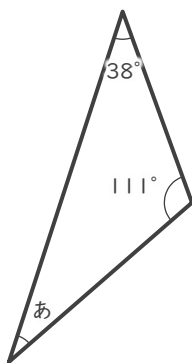
# 三角形の角の大きさ

年 組 名前

19

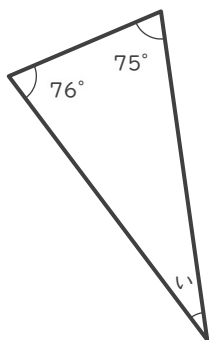
■ つぎの三角形の あ ~ け の角の大きさを答えましょう。

①



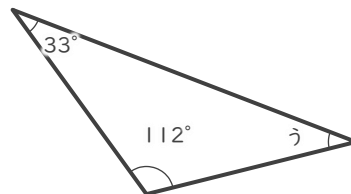
あ

②



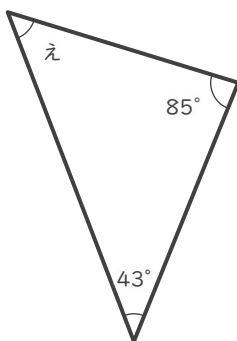
い

③



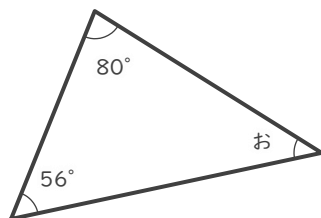
う

④



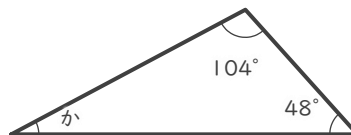
え

⑤



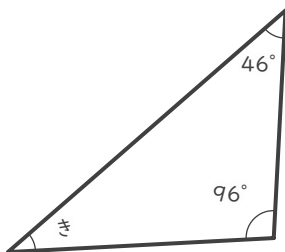
お

⑥



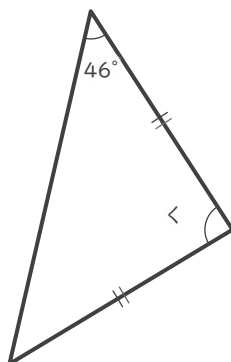
か

⑦



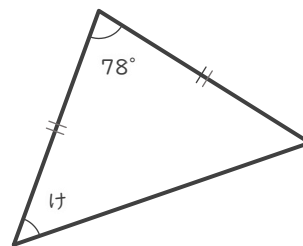
き

⑧



<

⑨



け

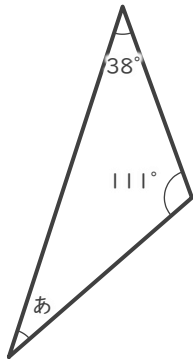
# 三角形の角の大きさ

年 組 名前

/ 9

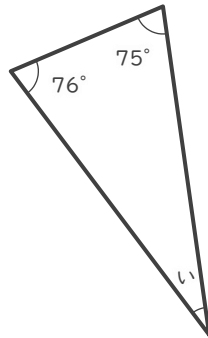
■ つぎの三角形の あ～け の角の大きさを答えましょう。

①



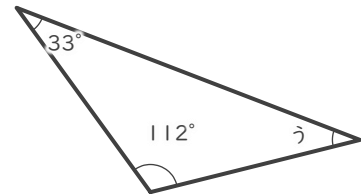
あ  $31^\circ$

②



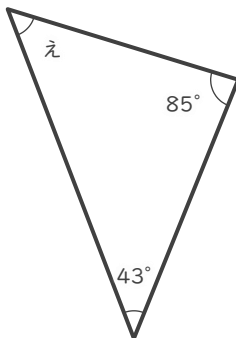
い  $29^\circ$

③



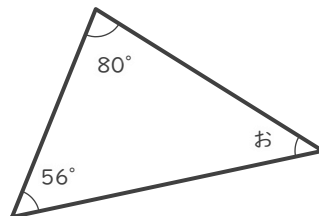
う  $35^\circ$

④



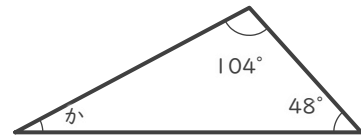
え  $52^\circ$

⑤



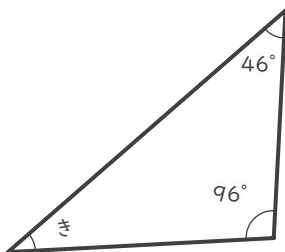
お  $44^\circ$

⑥



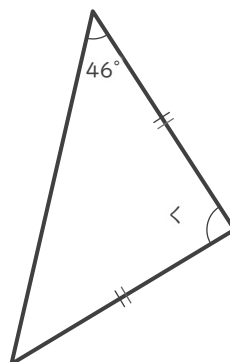
か  $28^\circ$

⑦



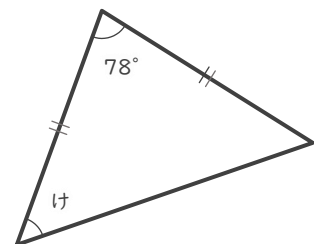
き  $38^\circ$

⑧



<  $88^\circ$

⑨



け  $51^\circ$