

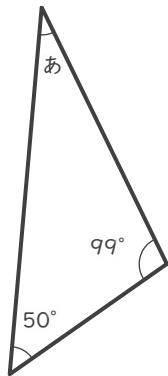
三角形の角の大きさ

年 組 名前

/ 9

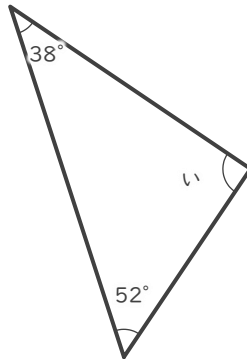
■ つぎの三角形の あ～け の角の大きさを答えましょう。

①



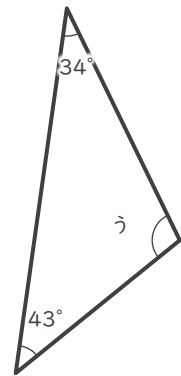
あ

②



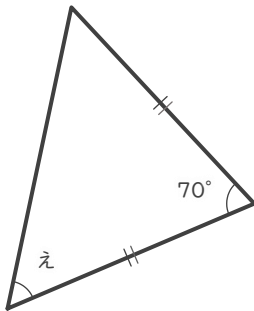
い

③



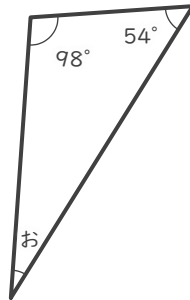
う

④



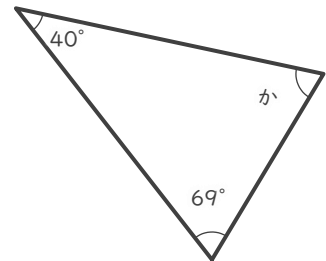
え

⑤



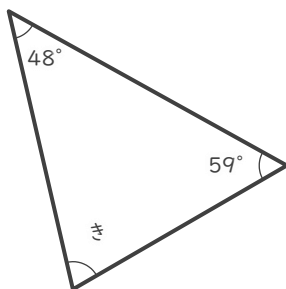
お

⑥



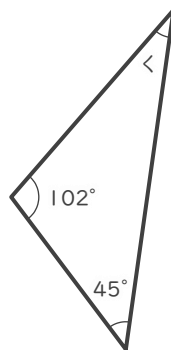
か

⑦



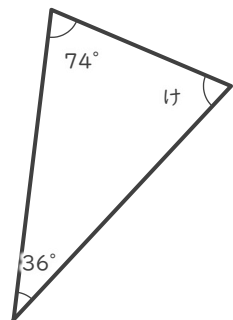
き

⑧



く

⑨



け

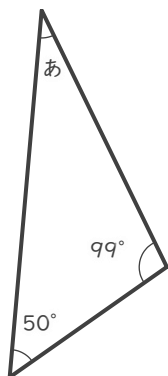
三角形の角の大きさ

年 組 名前

/ 9

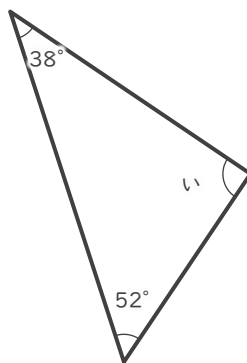
■ つぎの三角形の あ ~ け の角の大きさを答えましょう。

①



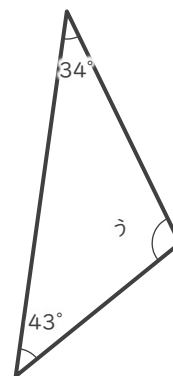
あ 31°

②



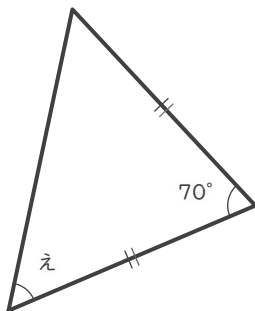
い 90°

③



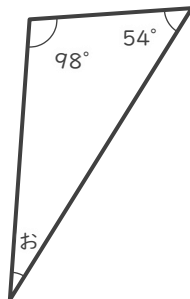
う 103°

④



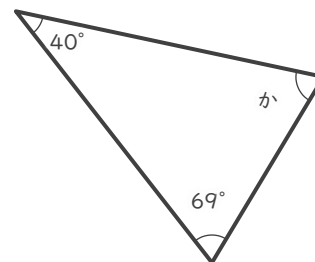
え 55°

⑤



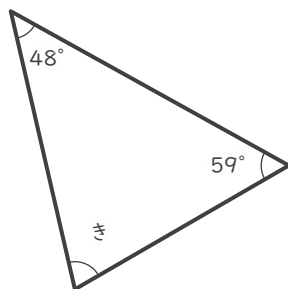
お 28°

⑥



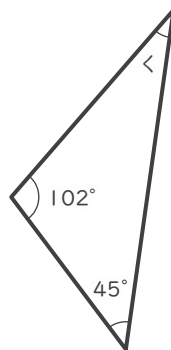
か 71°

⑦



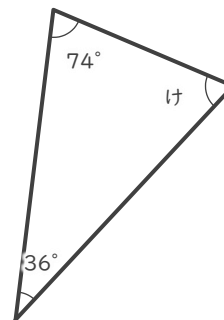
き 73°

⑧



く 33°

⑨



け 70°