

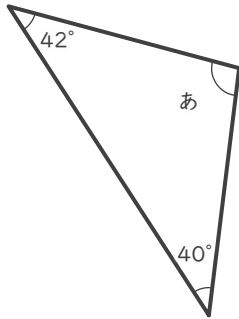
三角形の角の大きさ

年 組 名前

19

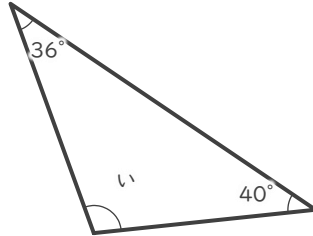
■ つぎの三角形の あ～け の角の大きさを答えましょう。

①



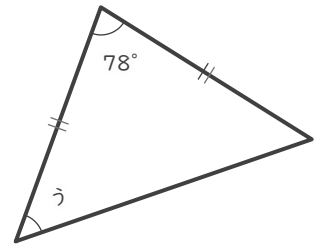
あ

②



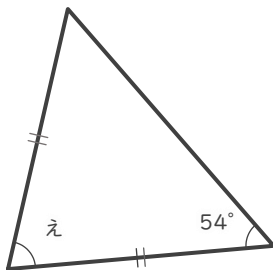
い

③



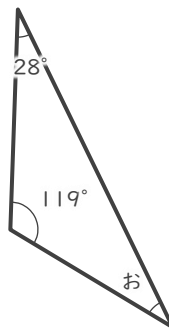
う

④



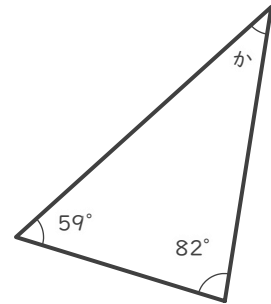
え

⑤



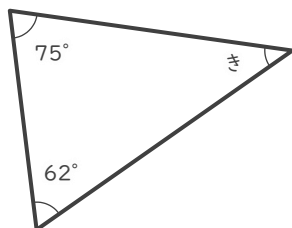
お

⑥



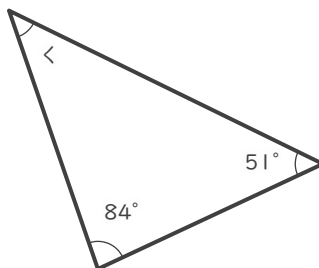
か

⑦



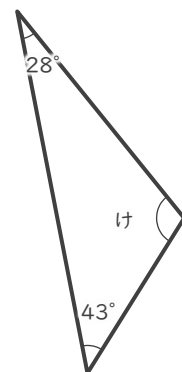
き

⑧



<

⑨



け

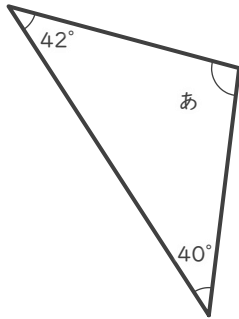
三角形の角の大きさ

年 組 名前

/ 9

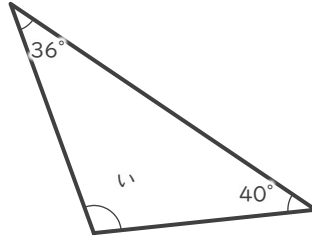
■ つぎの三角形の あ～け の角の大きさを答えましょう。

①



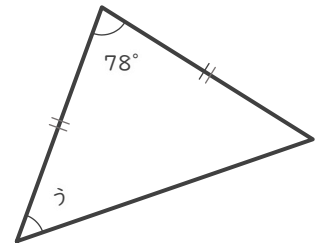
あ 98°

②



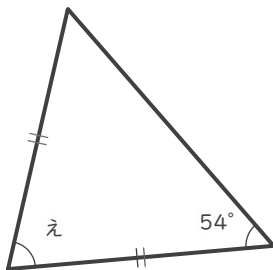
い 104°

③



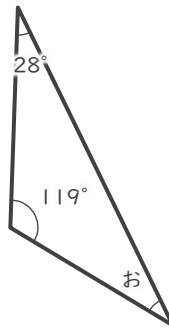
う 51°

④



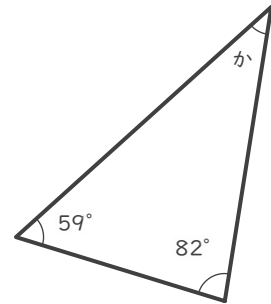
え 72°

⑤



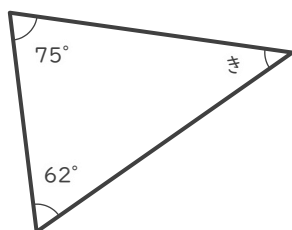
お 33°

⑥



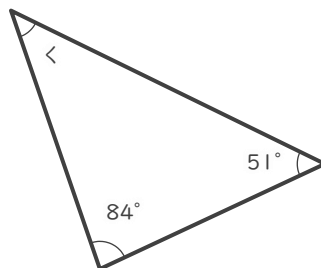
か 39°

⑦



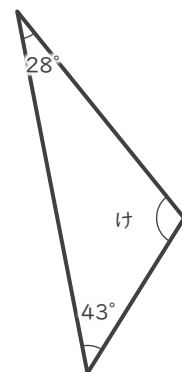
き 43°

⑧



< 45°

⑨



け 109°