

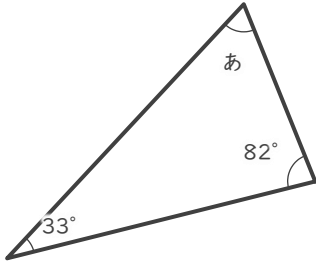
三角形の角の大きさ

____年 ____組 名前 _____

____ / 9

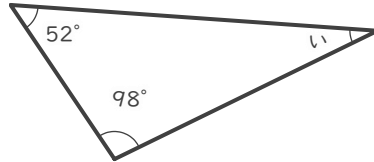
■ つぎの三角形の あ ~ け の角の大きさを答えましょう。

①



あ

②



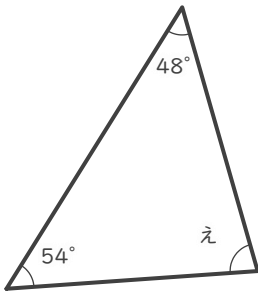
い

③



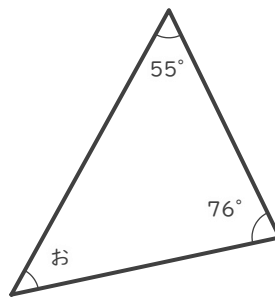
う

④



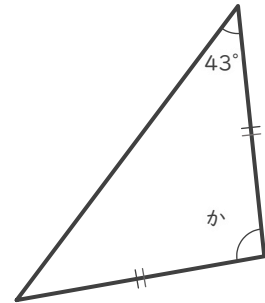
え

⑤



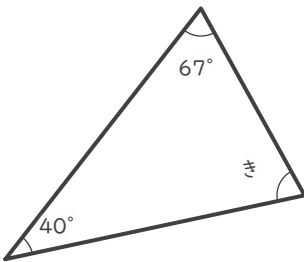
お

⑥



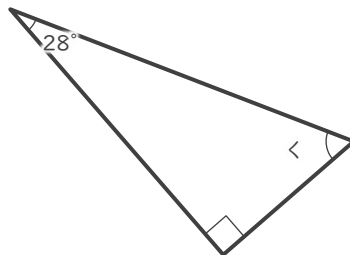
か

⑦



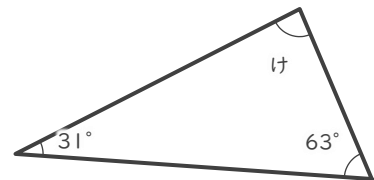
き

⑧



<

⑨



け

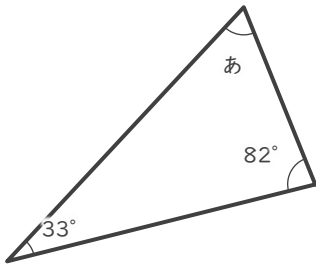
三角形の角の大きさ

年 組 名前

/ 9

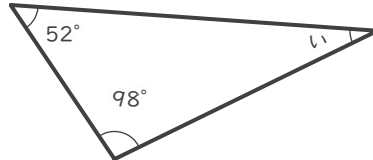
■ つぎの三角形の あ ~ け の角の大きさを答えましょう。

①



あ 65°

②



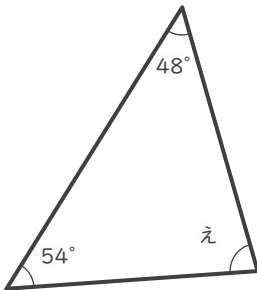
い 30°

③



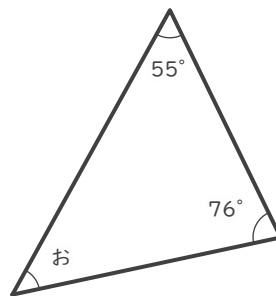
う 116°

④



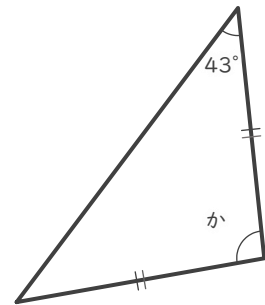
え 78°

⑤



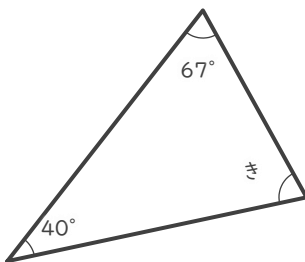
お 49°

⑥



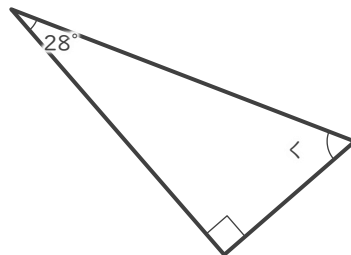
か 94°

⑦



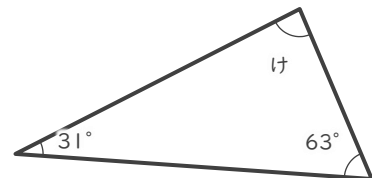
き 73°

⑧



< 62°

⑨



け 86°