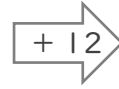
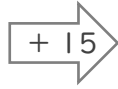
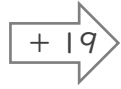




に入る数を答えましょう。

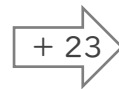
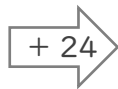
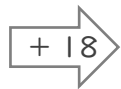
①

41



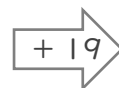
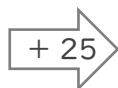
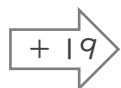
②

27



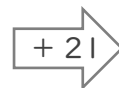
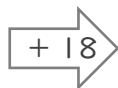
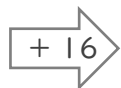
③

29



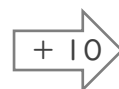
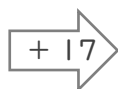
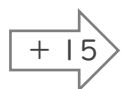
④

39



⑤

16



■ に入る数を答えましょう。

① $41 \xrightarrow{+19} 60 \xrightarrow{+15} 75 \xrightarrow{+12} 87$

② $27 \xrightarrow{+18} 45 \xrightarrow{+24} 69 \xrightarrow{+23} 92$

③ $29 \xrightarrow{+19} 48 \xrightarrow{+25} 73 \xrightarrow{+19} 92$

④ $39 \xrightarrow{+16} 55 \xrightarrow{+18} 73 \xrightarrow{+21} 94$

⑤ $16 \xrightarrow{+15} 31 \xrightarrow{+17} 48 \xrightarrow{+10} 58$