

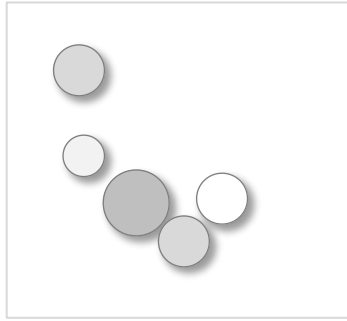

たしざん

ねん くみ
なまえ

19

■ たまを かぞえましょう。あわせるといくつになりますか。

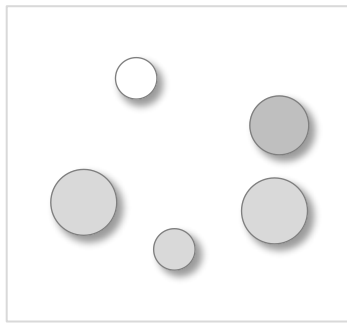

①



() + () = ()

あわせると

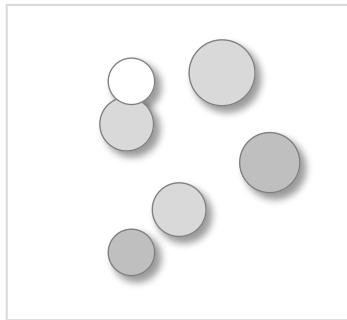

②



() + () = ()

あわせると

③



() + () = ()

あわせると

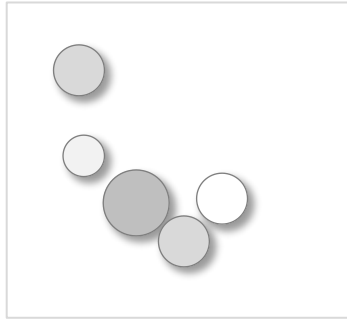

たしざん

ねん くみ
なまえ

19

■ たまを かぞえましょう。あわせるといくつになりますか。

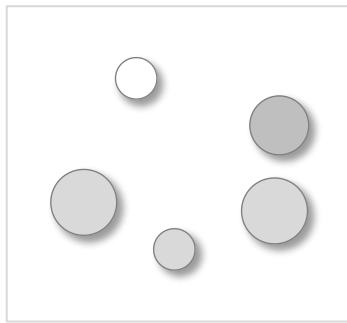

①



$$\left(\begin{array}{c} 2 \end{array} \right) + \left(\begin{array}{c} 5 \end{array} \right) = \left(\begin{array}{c} 7 \end{array} \right)$$

あわせると

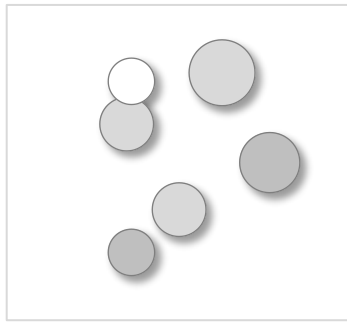

②



$$\left(\begin{array}{c} 3 \end{array} \right) + \left(\begin{array}{c} 5 \end{array} \right) = \left(\begin{array}{c} 8 \end{array} \right)$$

あわせると

③



$$\left(\begin{array}{c} 3 \end{array} \right) + \left(\begin{array}{c} 6 \end{array} \right) = \left(\begin{array}{c} 9 \end{array} \right)$$

あわせると