


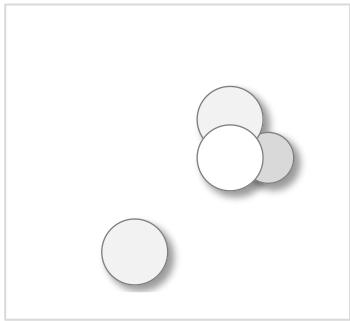
# たしざん

ねん くみ  
なまえ

19

■ たまを かぞえましょう。あわせるといくつになりますか。

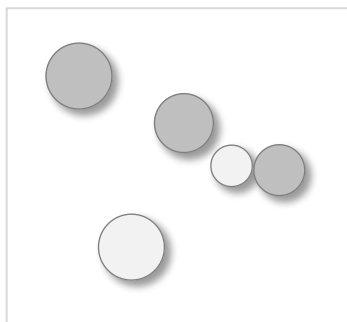
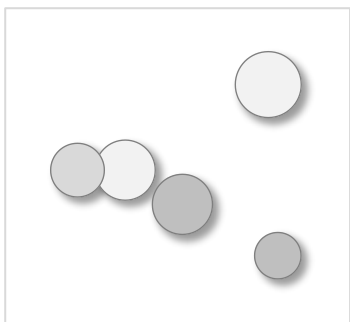
①



$$\left( \quad \right) + \left( \quad \right) = \left( \quad \right)$$

あわせると


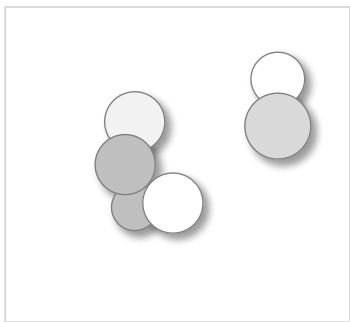
②



$$\left( \quad \right) + \left( \quad \right) = \left( \quad \right)$$

あわせると

③



$$\left( \quad \right) + \left( \quad \right) = \left( \quad \right)$$

あわせると

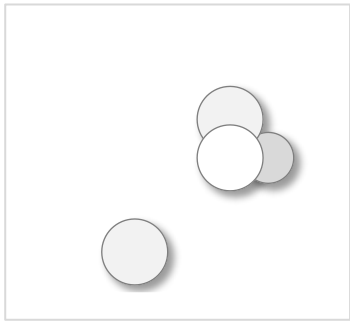
# たしざん

ねん くみ  
なまえ


19

■ たまを かぞえましょう。あわせるといくつになりますか。

①



( 4 )



( 3 )

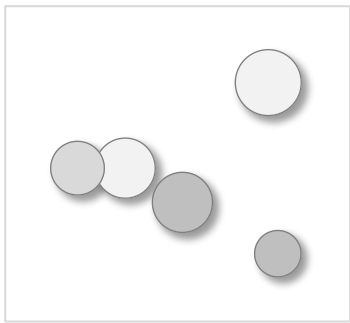
+

=

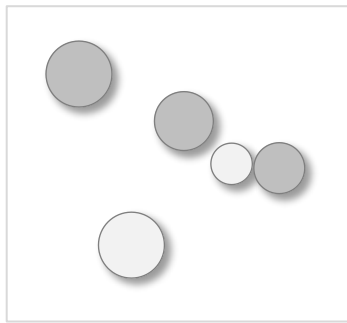
あわせると

( 7 )

②



( 5 )



( 5 )

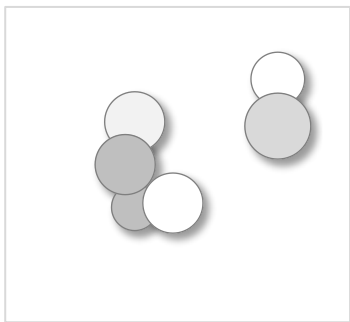
+

=


あわせると

( 10 )

③



( 6 )



( 2 )

+

=

あわせると

( 8 )