

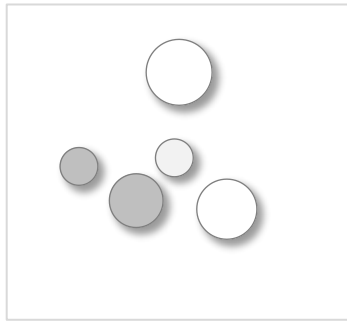

# たしざん

ねん くみ  
なまえ

19

■ たまを かぞえましょう。あわせるといくつになりますか。


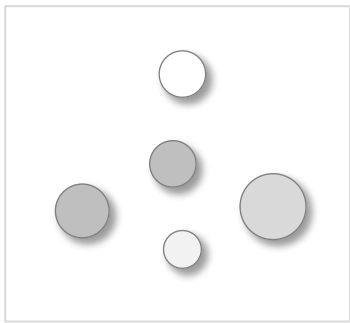
①



( ) + ( ) = ( )

あわせると

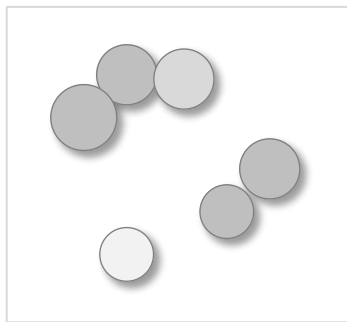
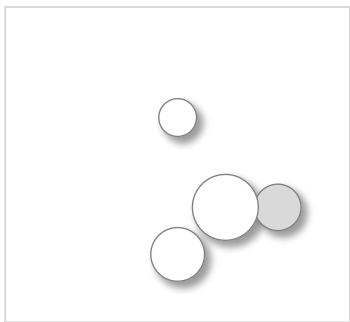
②



( ) + ( ) = ( )

あわせると

③



( ) + ( ) = ( )

あわせると

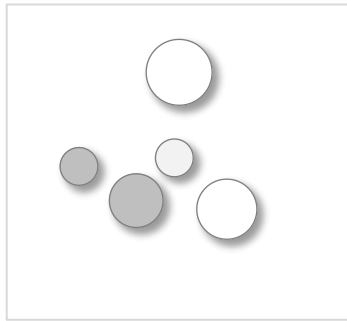

# たしざん

ねん くみ  
なまえ

19


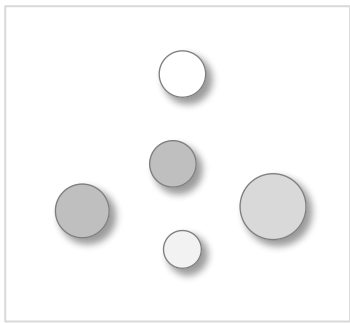
■ たまを かぞえましょう。あわせるといくつになりますか。

①



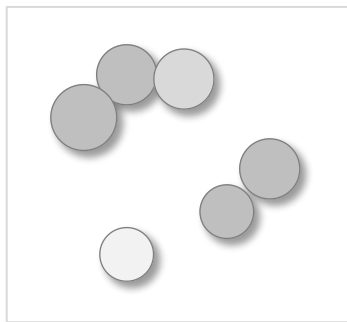
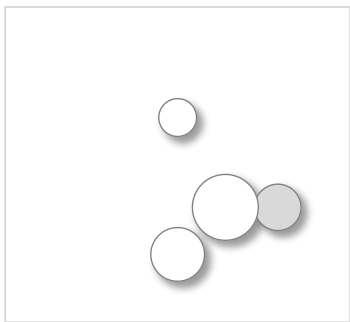
$$\left( \begin{array}{c} 2 \\ \hline \end{array} \right) + \left( \begin{array}{c} 5 \\ \hline \end{array} \right) = \left( \begin{array}{c} \text{あわせると} \\ 7 \\ \hline \end{array} \right)$$

②



$$\left( \begin{array}{c} 5 \\ \hline \end{array} \right) + \left( \begin{array}{c} 4 \\ \hline \end{array} \right) = \left( \begin{array}{c} \text{あわせると} \\ 9 \\ \hline \end{array} \right)$$

③



$$\left( \begin{array}{c} 4 \\ \hline \end{array} \right) + \left( \begin{array}{c} 6 \\ \hline \end{array} \right) = \left( \begin{array}{c} \text{あわせると} \\ 10 \\ \hline \end{array} \right)$$