
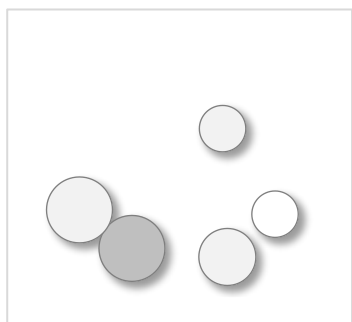


たしざん

ねん くみ
なまえ

■ たまを かぞえましょう。あわせるといくつになりますか。

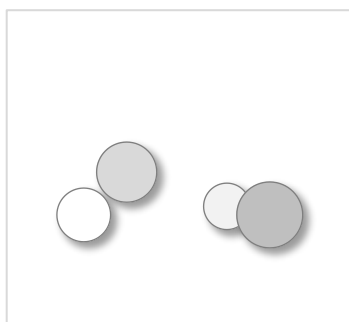

①



$$\left(\quad \right) + \left(\quad \right) = \left(\quad \right)$$

あわせると

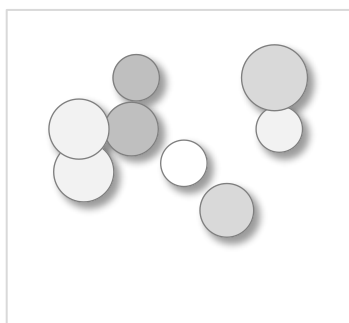

②



$$\left(\quad \right) + \left(\quad \right) = \left(\quad \right)$$

あわせると

③



$$\left(\quad \right) + \left(\quad \right) = \left(\quad \right)$$

あわせると


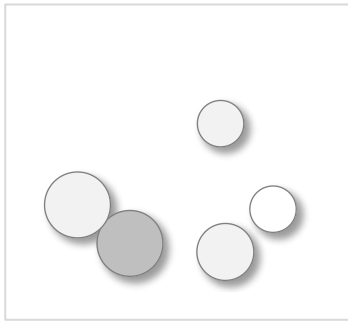
たしざん

ねん くみ
なまえ

19

■ たまを かぞえましょう。あわせるといくつになりますか。

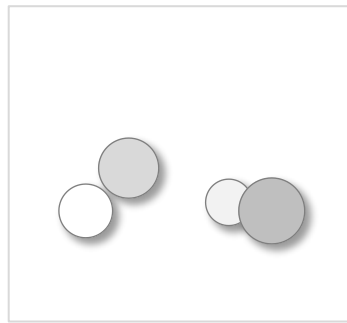

①



$$\left(\begin{array}{c} 5 \\ \hline \end{array} \right) + \left(\begin{array}{c} 2 \\ \hline \end{array} \right) = \left(\begin{array}{c} 7 \\ \hline \end{array} \right)$$

あわせると

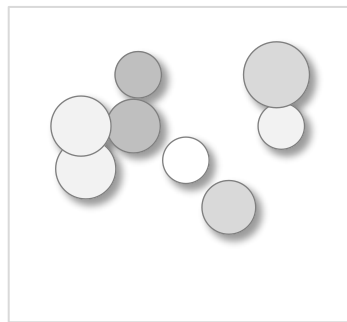

②



$$\left(\begin{array}{c} 4 \\ \hline \end{array} \right) + \left(\begin{array}{c} 4 \\ \hline \end{array} \right) = \left(\begin{array}{c} 8 \\ \hline \end{array} \right)$$

あわせると

③



$$\left(\begin{array}{c} 2 \\ \hline \end{array} \right) + \left(\begin{array}{c} 8 \\ \hline \end{array} \right) = \left(\begin{array}{c} 10 \\ \hline \end{array} \right)$$

あわせると