



# たしざん

ねん くみ  
なまえ

■ たまを かぞえましょう。あわせるといくつになりますか。


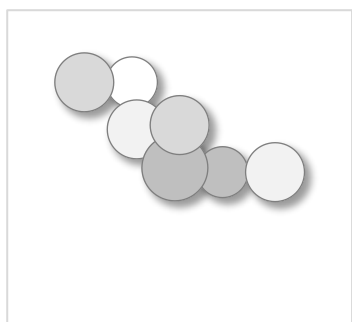
①



( ) + ( ) = ( )

あわせると

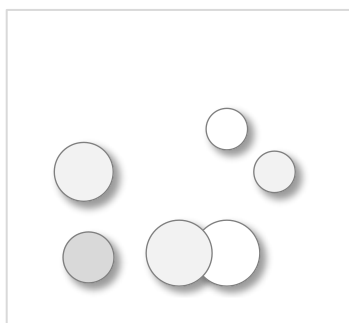

②



( ) + ( ) = ( )

あわせると

③



( ) + ( ) = ( )

あわせると


# たしざん

ねん くみ  
なまえ


19

■ たまを かぞえましょう。あわせるといくつになりますか。

①



( 3 )



( 3 )

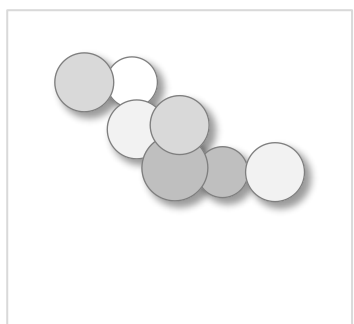
+

=

あわせると

( 6 )

②



( 7 )



( 2 )


+

=

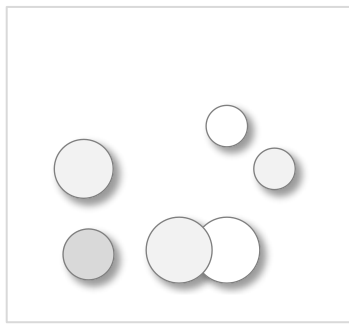
あわせると

( 9 )

③



( 2 )



( 6 )

+

=

あわせると

( 8 )