



たしざん

ねん くみ
なまえ

■ たまを かぞえましょう。あわせるといくつになりますか。



①



() + () = ()

あわせると

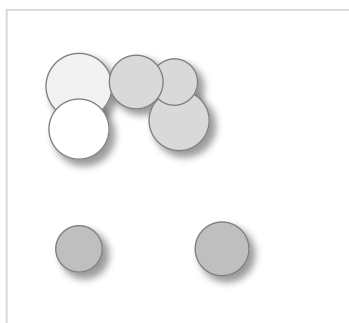

②



() + () = ()

あわせると

③



() + () = ()

あわせると



たしざん

ねん くみ
なまえ

19


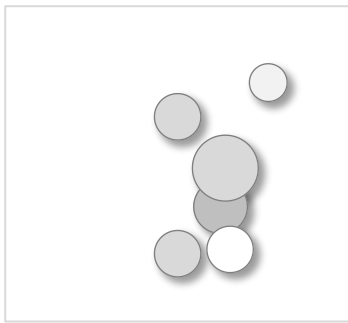
■ たまを かぞえましょう。あわせるといくつになりますか。

①



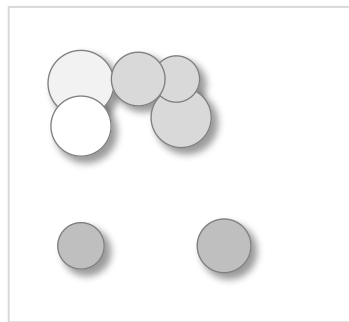

$$\left(\begin{array}{c} 2 \\ \hline \end{array} \right) + \left(\begin{array}{c} 4 \\ \hline \end{array} \right) = \left(\begin{array}{c} \text{あわせると} \\ 6 \\ \hline \end{array} \right)$$

②



$$\left(\begin{array}{c} 6 \\ \hline \end{array} \right) + \left(\begin{array}{c} 2 \\ \hline \end{array} \right) = \left(\begin{array}{c} \text{あわせると} \\ 8 \\ \hline \end{array} \right)$$

③



$$\left(\begin{array}{c} 3 \\ \hline \end{array} \right) + \left(\begin{array}{c} 7 \\ \hline \end{array} \right) = \left(\begin{array}{c} \text{あわせると} \\ 10 \\ \hline \end{array} \right)$$