

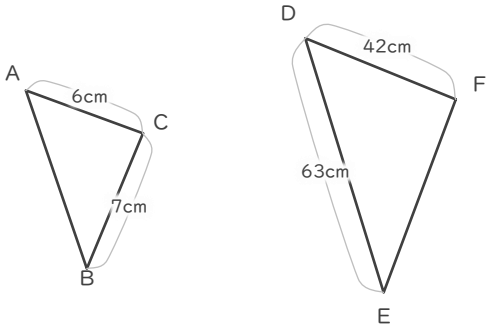
# 拡大図

年 組 名前

/ 6

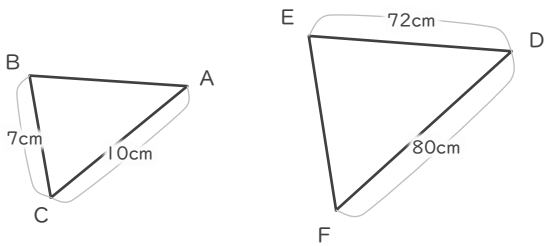
■ 三角形DEFは三角形ABCの拡大図です。それぞれ何倍の拡大図でしょう。

①



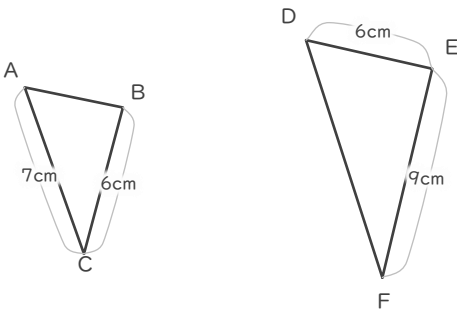
倍

②



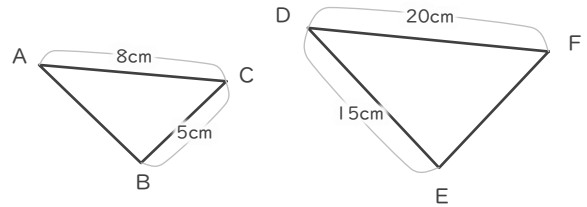
倍

③



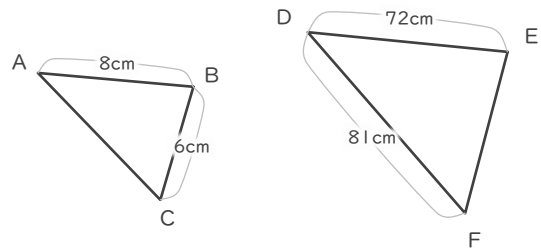
倍

④



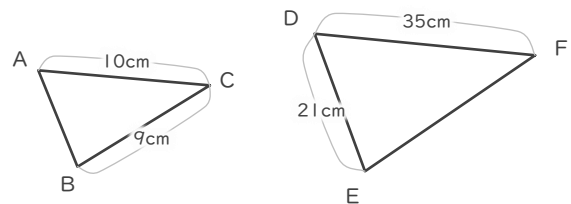
倍

⑤



倍

⑥



倍

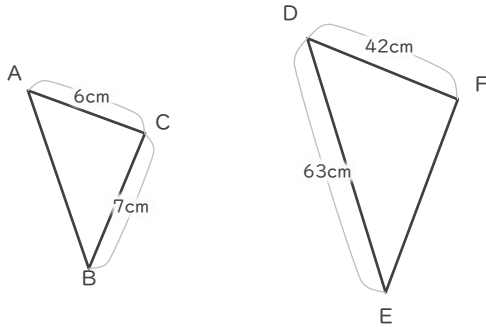
# 拡大図

年 組 名前

/ 6

■ 三角形DEFは三角形ABCの拡大図です。それぞれ何倍の拡大図でしょう。

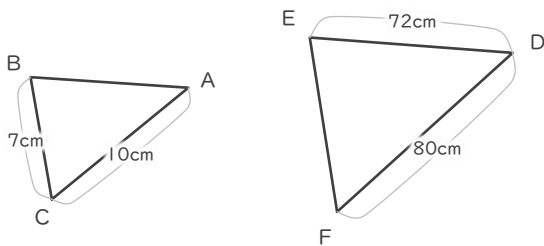
①



$$42 \div 6 = 7$$

7 倍

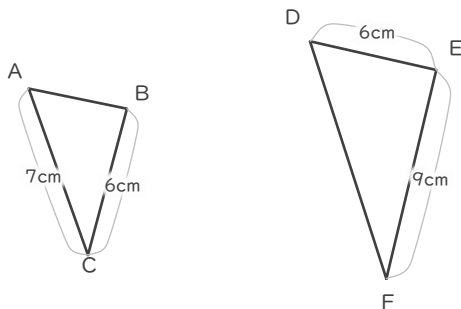
②



$$80 \div 10 = 8$$

8 倍

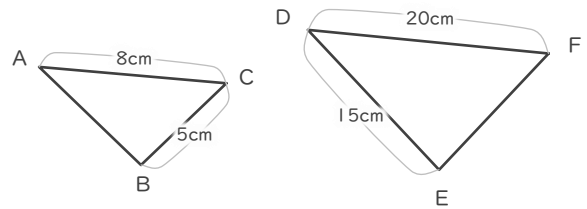
③



$$9 \div 6 = 1.5$$

1.5 倍

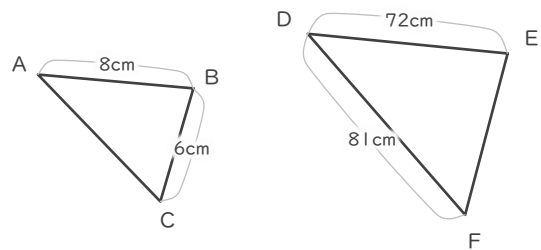
④



$$20 \div 8 = 2.5$$

2.5 倍

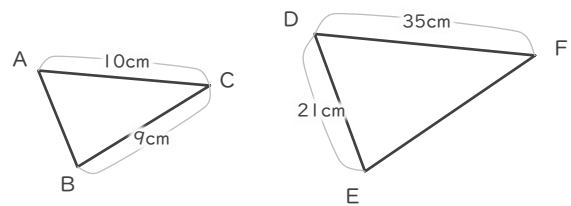
⑤



$$72 \div 8 = 9$$

9 倍

⑥



$$35 \div 10 = 3.5$$

3.5 倍