

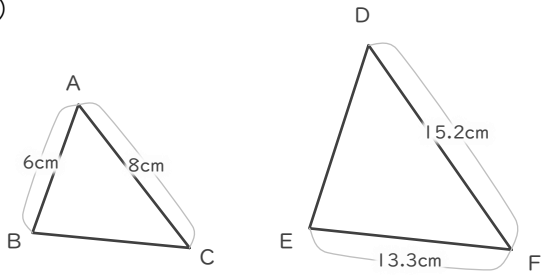
拡大図

年 組 名前

/ 6

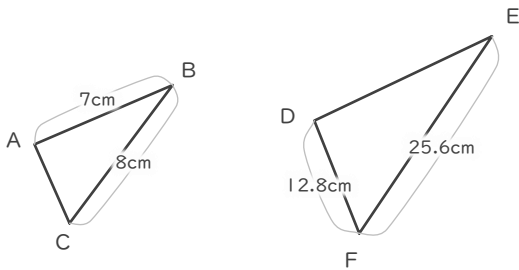
■ 三角形DEFは三角形ABCの拡大図です。それぞれ何倍の拡大図でしょう。

①



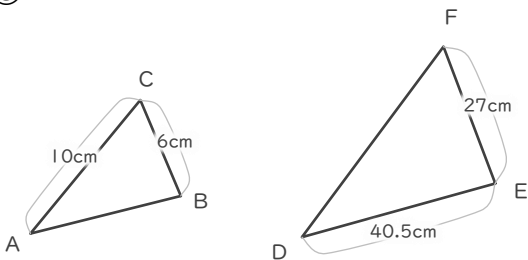
倍

②



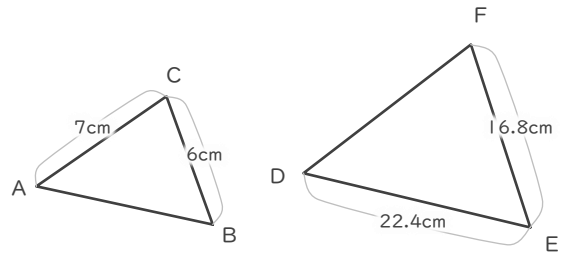
倍

③



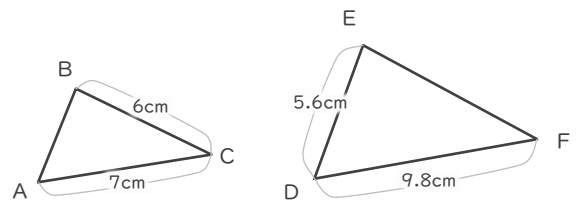
倍

④



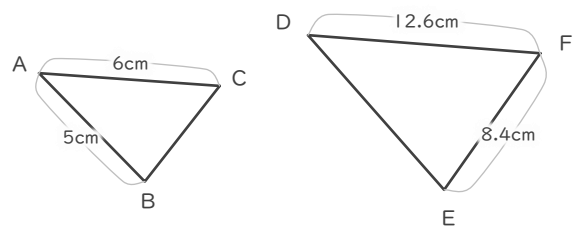
倍

⑤



倍

⑥



倍

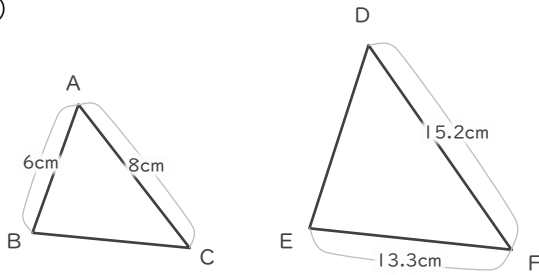
拡大図

年 組 名前

/ 6

■ 三角形DEFは三角形ABCの拡大図です。それぞれ何倍の拡大図でしょう。

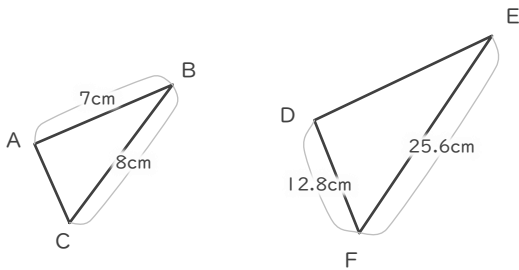
①



$$15.2 \div 8 = 1.9$$

1.9 倍

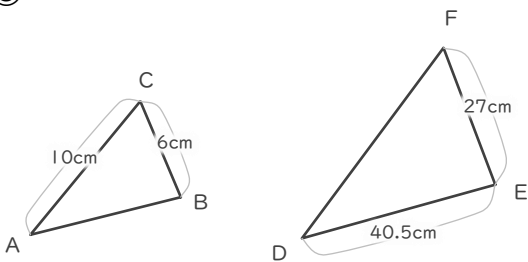
②



$$25.6 \div 8 = 3.2$$

3.2 倍

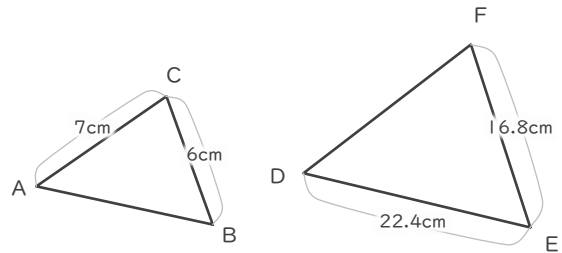
③



$$27 \div 6 = 4.5$$

4.5 倍

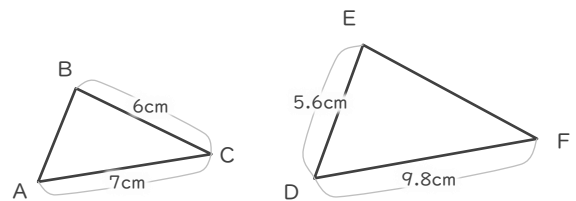
④



$$16.8 \div 6 = 2.8$$

2.8 倍

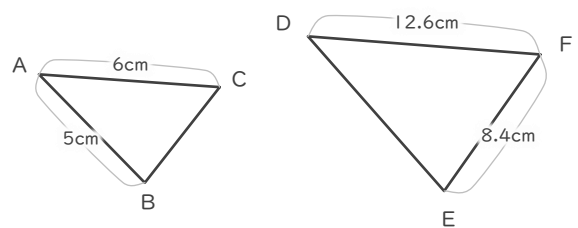
⑤



$$9.8 \div 7 = 1.4$$

1.4 倍

⑥



$$12.6 \div 6 = 2.1$$

2.1 倍