

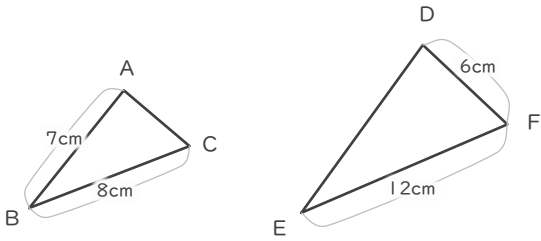
# 拡大図

年 組 名前

/ 6

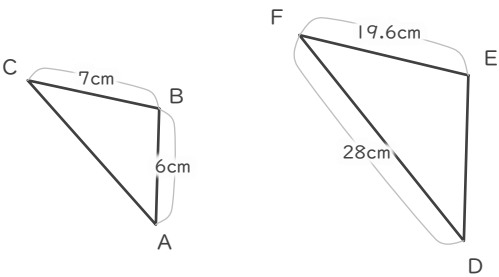
■ 三角形DEFは三角形ABCの拡大図です。それぞれ何倍の拡大図でしょう。

①



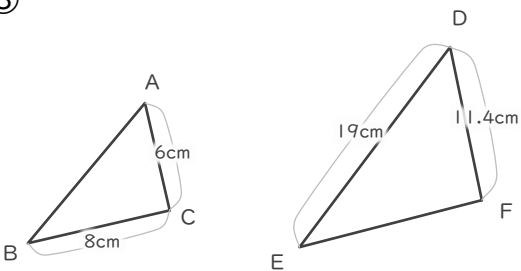
倍

②



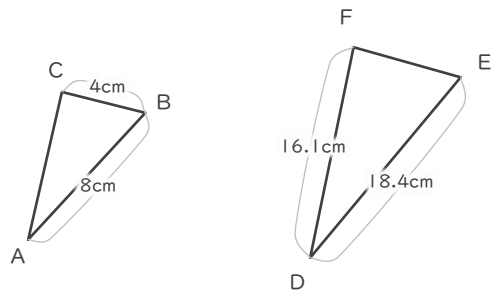
倍

③



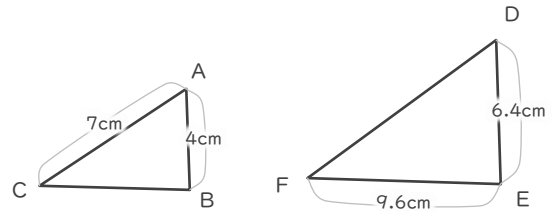
倍

④



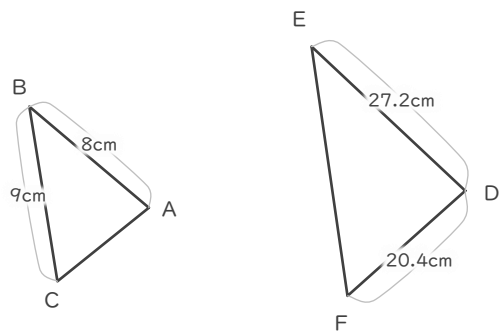
倍

⑤



倍

⑥



倍

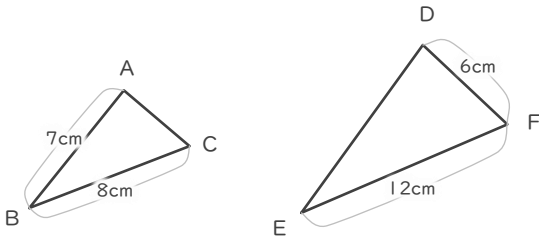
# 拡大図

年 組 名前

/ 6

■ 三角形DEFは三角形ABCの拡大図です。それぞれ何倍の拡大図でしょう。

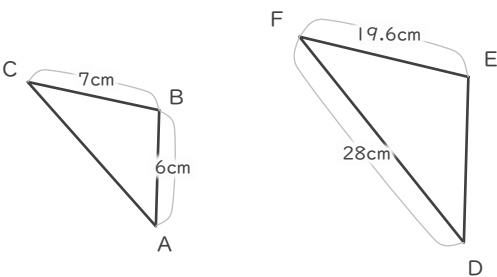
①



$$12 \div 8 = 1.5$$

1.5 倍

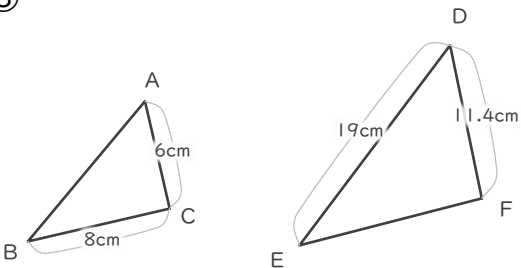
②



$$19.6 \div 7 = 2.8$$

2.8 倍

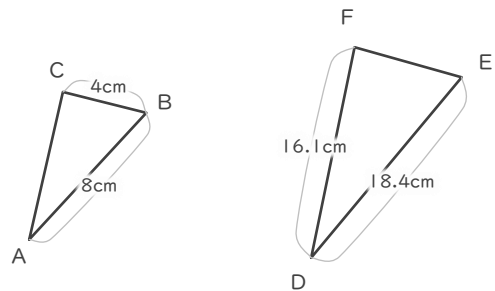
③



$$11.4 \div 6 = 1.9$$

1.9 倍

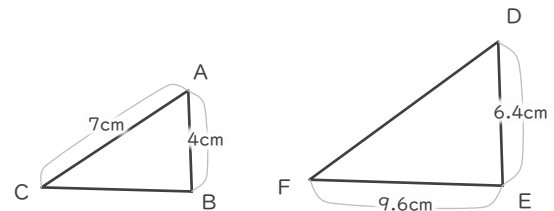
④



$$18.4 \div 8 = 2.3$$

2.3 倍

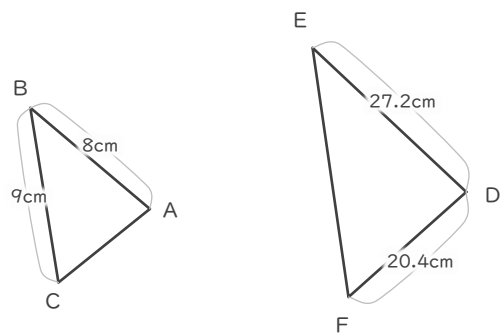
⑤



$$6.4 \div 4 = 1.6$$

1.6 倍

⑥



$$27.2 \div 8 = 3.4$$

3.4 倍