

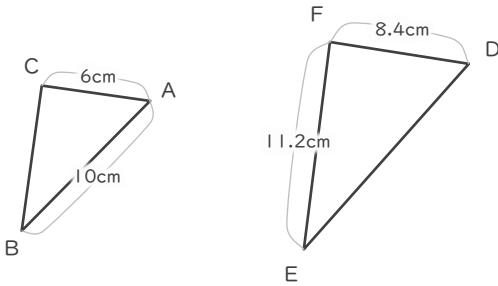
拡大図

年 組 名前

/ 6

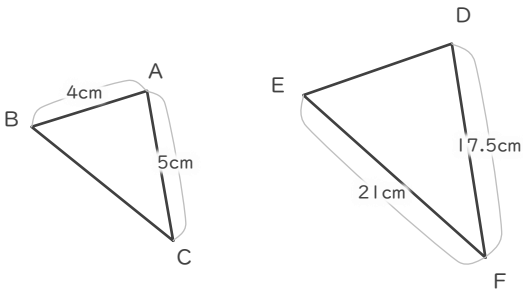
■ 三角形DEFは三角形ABCの拡大図です。それぞれ何倍の拡大図でしょう。

①



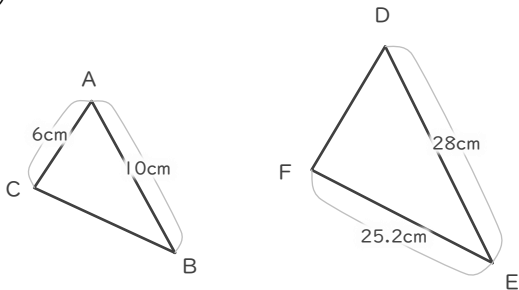
倍

②



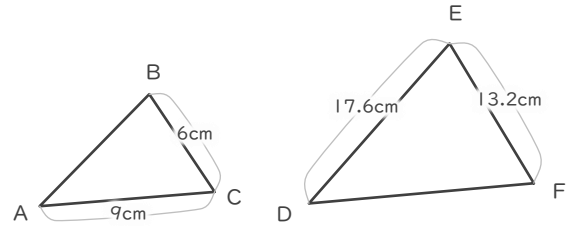
倍

③



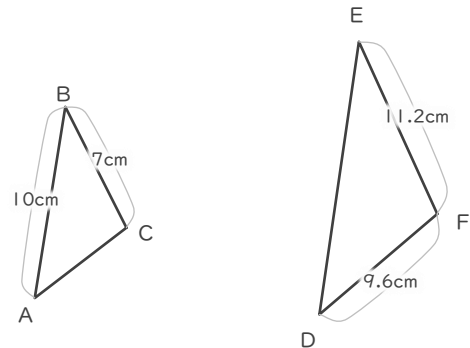
倍

④



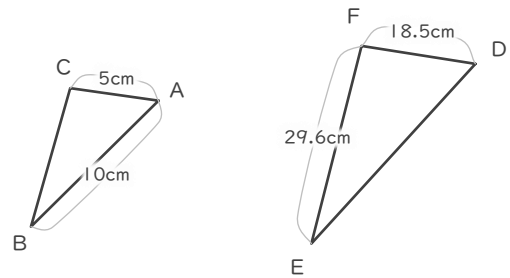
倍

⑤



倍

⑥



倍

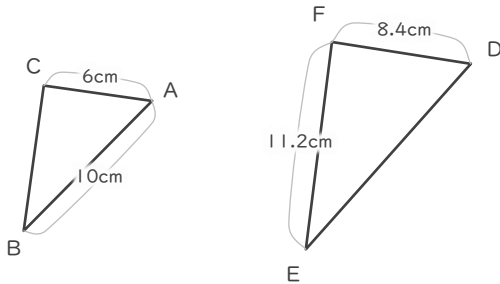
拡大図

年 組 名前

/ 6

■ 三角形DEFは三角形ABCの拡大図です。それぞれ何倍の拡大図でしょう。

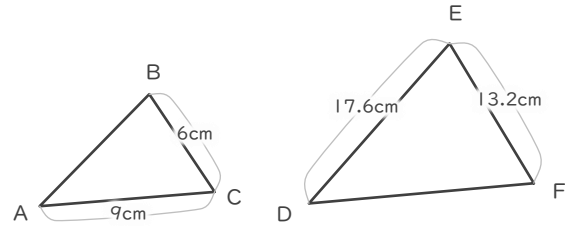
①



$$8.4 \div 6 = 1.4$$

1.4 倍

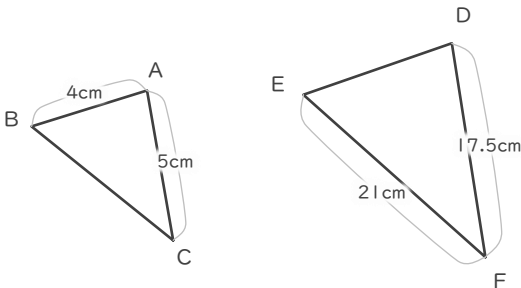
④



$$13.2 \div 6 = 2.2$$

2.2 倍

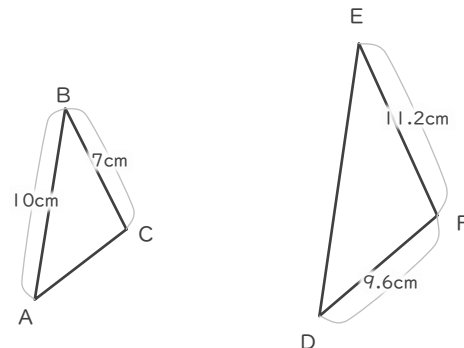
②



$$17.5 \div 5 = 3.5$$

3.5 倍

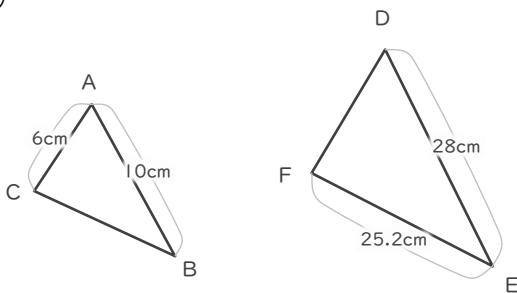
⑤



$$11.2 \div 7 = 1.6$$

1.6 倍

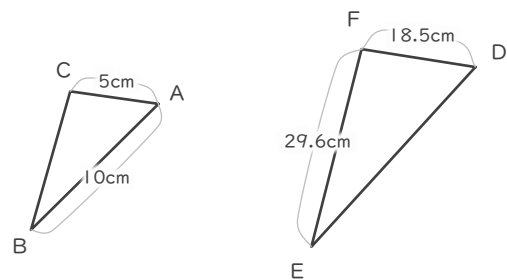
③



$$28 \div 10 = 2.8$$

2.8 倍

⑥



$$18.5 \div 5 = 3.7$$

3.7 倍