

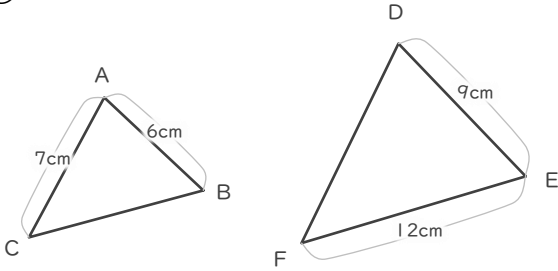
# 拡大図

年 組 名前

/ 6

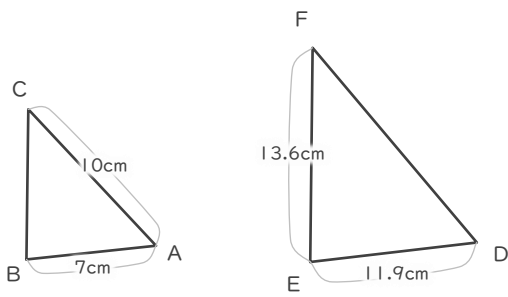
■ 三角形DEFは三角形ABCの拡大図です。それぞれ何倍の拡大図でしょう。

①



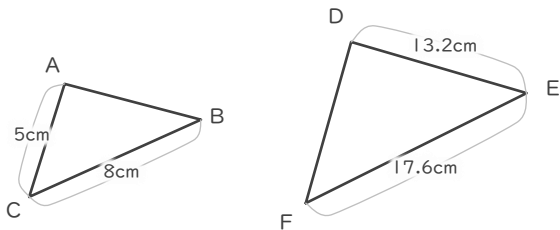
倍

②



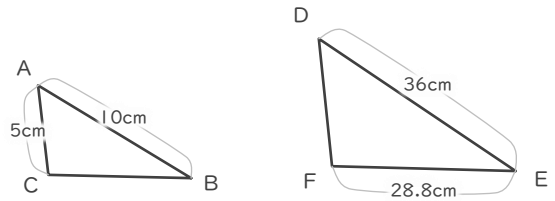
倍

③



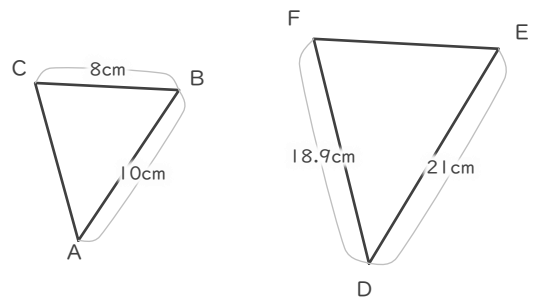
倍

④



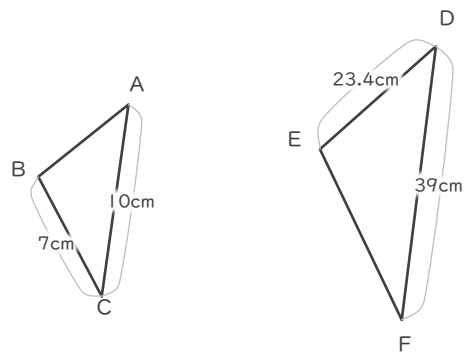
倍

⑤



倍

⑥



倍

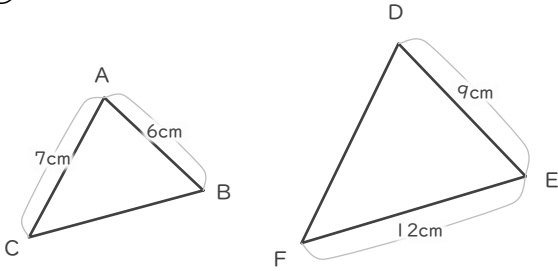
# 拡大図

年 組 名前

/ 6

■ 三角形DEFは三角形ABCの拡大図です。それぞれ何倍の拡大図でしょう。

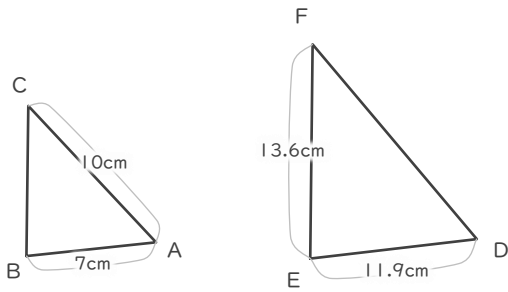
①



$$9 \div 6 = 1.5$$

1.5 倍

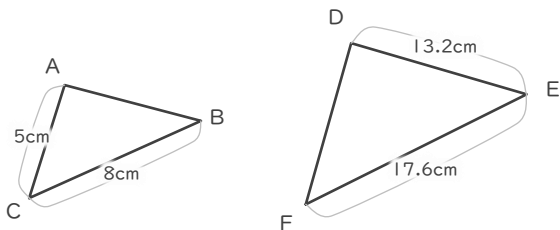
②



$$11.9 \div 7 = 1.7$$

1.7 倍

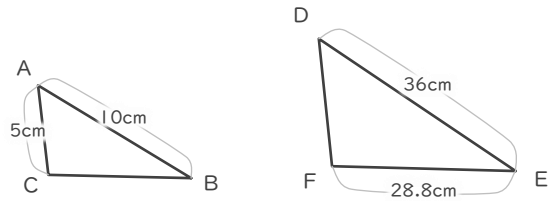
③



$$17.6 \div 8 = 2.2$$

2.2 倍

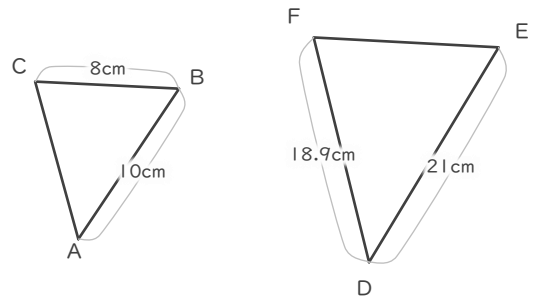
④



$$36 \div 10 = 3.6$$

3.6 倍

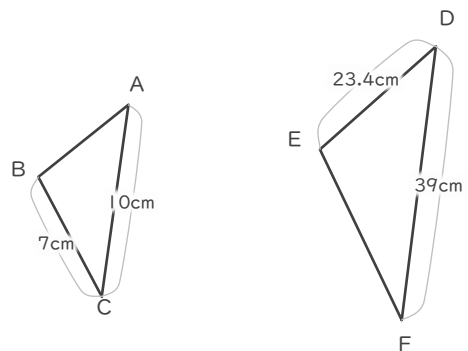
⑤



$$21 \div 10 = 2.1$$

2.1 倍

⑥



$$39 \div 10 = 3.9$$

3.9 倍