

# 正負の数の加法

年 組 名前

/30

■ 次のたし算をなさい。

①  $(-2) + (-2) =$



②  $(+6) + (-9) =$



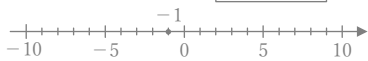
③  $(+6) + (-7) =$



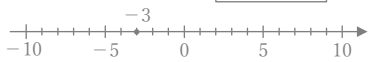
④  $(-3) + (+7) =$



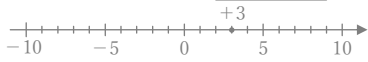
⑤  $(-1) + (-5) =$



⑥  $(-3) + (-3) =$



⑦  $(+3) + (-8) =$



⑧  $(-4) + (+8) =$



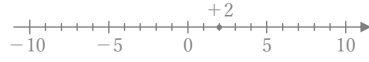
⑨  $(-4) + (-5) =$



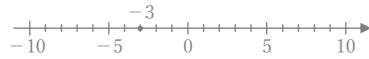
⑩  $(+2) + (-7) =$



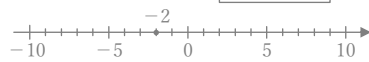
⑪  $(+2) + (-6) =$



⑫  $(-3) + (-5) =$



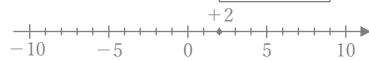
⑬  $(-2) + (-7) =$



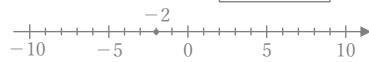
⑭  $(-1) + (-4) =$



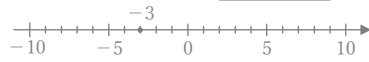
⑮  $(+2) + (-3) =$



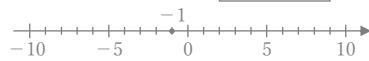
⑯  $(-2) + (+4) =$



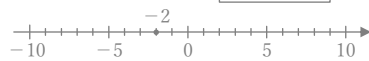
⑰  $(-3) + (+5) =$



⑱  $(-1) + (-7) =$



⑲  $(-2) + (+8) =$



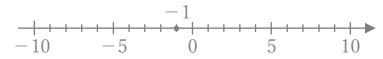
⑳  $(+3) + (-9) =$



㉑  $(+4) + (-7) =$



㉒  $(-1) + (+4) =$



㉓  $(-7) + (+8) =$



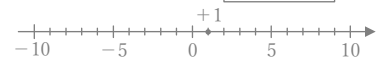
㉔  $(-2) + (-3) =$



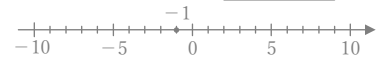
㉕  $(-6) + (+8) =$



㉖  $(+1) + (-9) =$



㉗  $(-1) + (-2) =$



㉘  $(-3) + (+4) =$



㉙  $(+4) + (-6) =$



㉚  $(-5) + (+8) =$



# 正負の数の加法

年 組 名前

/30

■ 次のたし算をなさい。

