

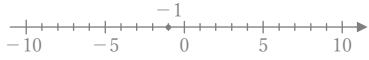
正負の数の加法

年 組 名前

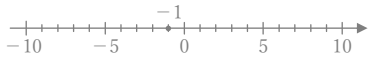
/30

■ 次のたし算をしなさい。

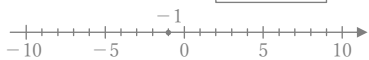
① $(-1) + (+2) =$



② $(-1) + (-5) =$



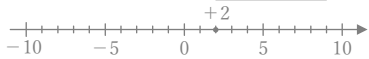
③ $(-1) + (-6) =$



④ $(-6) + (+9) =$



⑤ $(+2) + (-8) =$



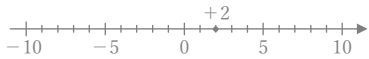
⑥ $(+8) + (-9) =$



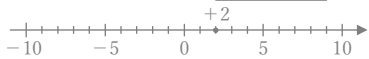
⑦ $(+3) + (-5) =$



⑧ $(+2) + (-4) =$



⑨ $(+2) + (-9) =$



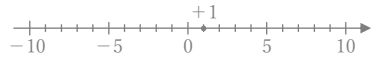
⑩ $(-5) + (+6) =$



⑪ $(+2) + (-7) =$



⑫ $(+1) + (-5) =$



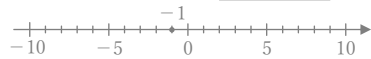
⑬ $(-4) + (-5) =$



⑭ $(-3) + (+6) =$



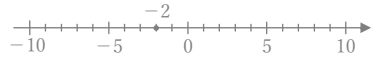
⑮ $(-1) + (-4) =$



⑯ $(+5) + (-7) =$



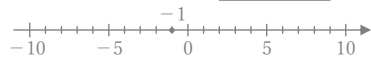
⑰ $(-2) + (-3) =$



⑱ $(-3) + (-3) =$



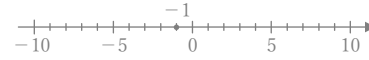
⑲ $(-1) + (+9) =$



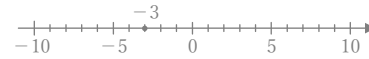
⑳ $(-5) + (+8) =$



㉑ $(-1) + (+3) =$



㉒ $(-3) + (+4) =$



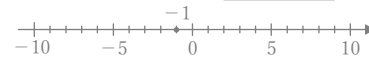
㉓ $(+4) + (-6) =$



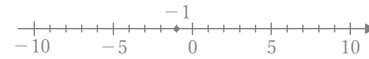
㉔ $(+4) + (-9) =$



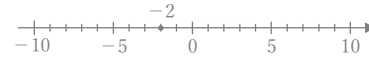
㉕ $(-1) + (-8) =$



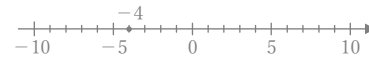
㉖ $(-1) + (-3) =$



㉗ $(-2) + (-5) =$



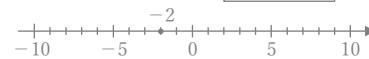
㉘ $(-4) + (-4) =$



㉙ $(-7) + (+8) =$



㉚ $(-2) + (+3) =$



正負の数の加法

年 組 名前

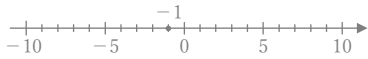
/30

■ 次のたし算をしなさい。

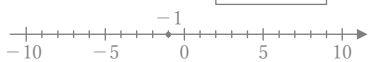
① $(-1) + (+2) =$ +1



② $(-1) + (-5) =$ -6



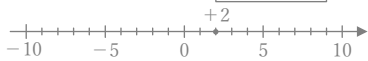
③ $(-1) + (-6) =$ -7



④ $(-6) + (+9) =$ +3



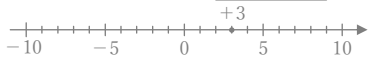
⑤ $(+2) + (-8) =$ -6



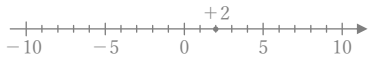
⑥ $(+8) + (-9) =$ -1



⑦ $(+3) + (-5) =$ -2



⑧ $(+2) + (-4) =$ -2



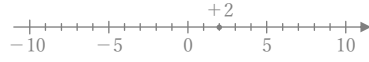
⑨ $(+2) + (-9) =$ -7



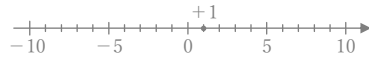
⑩ $(-5) + (+6) =$ +1



⑪ $(+2) + (-7) =$ -5



⑫ $(+1) + (-5) =$ -4



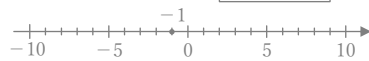
⑬ $(-4) + (-5) =$ -9



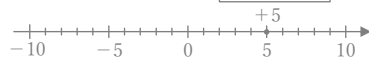
⑭ $(-3) + (+6) =$ +3



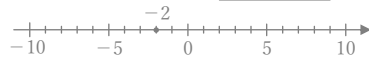
⑮ $(-1) + (-4) =$ -5



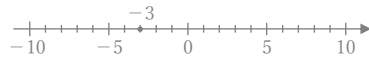
⑯ $(+5) + (-7) =$ -2



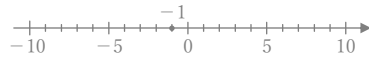
⑰ $(-2) + (-3) =$ -5



⑱ $(-3) + (-3) =$ -6



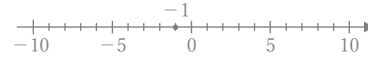
⑲ $(-1) + (+9) =$ +8



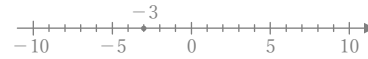
⑳ $(-5) + (+8) =$ +3



㉑ $(-1) + (+3) =$ +2



㉒ $(-3) + (+4) =$ +1



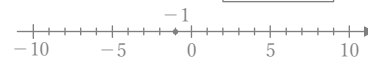
㉓ $(+4) + (-6) =$ -2



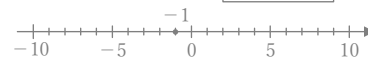
㉔ $(+4) + (-9) =$ -5



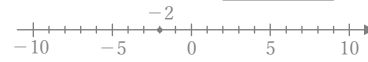
㉕ $(-1) + (-8) =$ -9



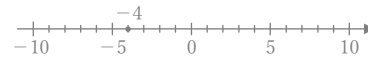
㉖ $(-1) + (-3) =$ -4



㉗ $(-2) + (-5) =$ -7



㉘ $(-4) + (-4) =$ -8



㉙ $(-7) + (+8) =$ +1



㉚ $(-2) + (+3) =$ +1

